



CYBER

School Level Examination

GRADE

1

DO NOT OPEN THIS BOOKLET UNTIL INSTRUCTED TO DO SO

- * All questions are compulsory.
- * Read the instructions on the **ANSWER SHEET** and fill in your **NAME, CLASS and OTHER INFORMATION**.

To mark your choice of answer by darkening the circles in the Answer Sheet, use an **HB Pencil** only.

- * You **MUST** record your answers on the **ANSWER SHEET**.
- * There are 30 **MULTIPLE CHOICE QUESTIONS**. Use the information provided to choose the **BEST** answer among the four possible options.

On your **ANSWER SHEET** fill in the oval that matches your answer.

- * Marks are **NOT** deducted for incorrect answers.
- * Return the **Answer Sheet** to the invigilator at the end of the examination.
- * Write your Roll No. on the Question Paper too and take it home for future reference.
- * You are **NOT** allowed to use a calculator.

You may use a ruler and spare paper for rough work.

Section - A

(This section contains 5 multiple choice questions. Each question has four choices (A), (B), (C) and (D), out of which only ONE is correct.)

1. Which letter is fifth from the left end in the given word?



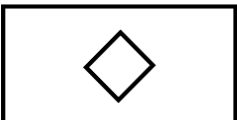


- (A) U (B) T
(C) M (D) P
2. What time does the clock show?



- (A) 6:00 (B) 6:13
(C) 6:15 (D) 6:20
3. How many shapes in the following set have four corners?



- (A) 1 (B) 2
(C) 3 (D) 4
4. If  is to , then  is to _____.

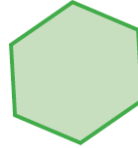
- (A)  (B) 
(C)  (D) 

5. Which of the given shapes can fit the given figure?




(A)

(B)



(C)

(D)

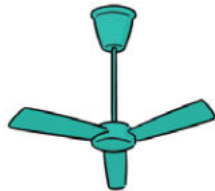


Section - B

(This section contains 25 multiple choice questions. Each question has four choices (A), (B), (C) and (D), out of which only ONE is correct.)

6. Which of the following machines will Rishabh use to go to School?

(A)




(B)



(C)



(D)



7. Number keys are also known as _____ keys.

(A) Special

(B) Numeric

(C) Alphanumeric

(D) Alphabet

8. I do most of the work of the computer. Who am I?

(A)



(B)



(C)



(D)



9. How many sets of number keys are there on the keyboard?

(A) 1

(B) 2

(C) 3

(D) 4

10. Where does the mouse rest?

(A) Mat

(B) Pad

(C) Bed

(D) Paper

11. Which of the following machines is used to talk to people?

(A)



(B)



(C)



(D)



12. Which tool would you use to erase areas of your picture in MS Paint?

(A)

(B)



(C)

(D)



13. CPU is like the _____ of a computer.

(A) Brain

(B) Heart

(C) Hands

(D) Veins

14. You use me to erase the character to the left of the cursor. Who am I?



15. We must keep the computer room _____.

(A) Wet

(B) Dusty

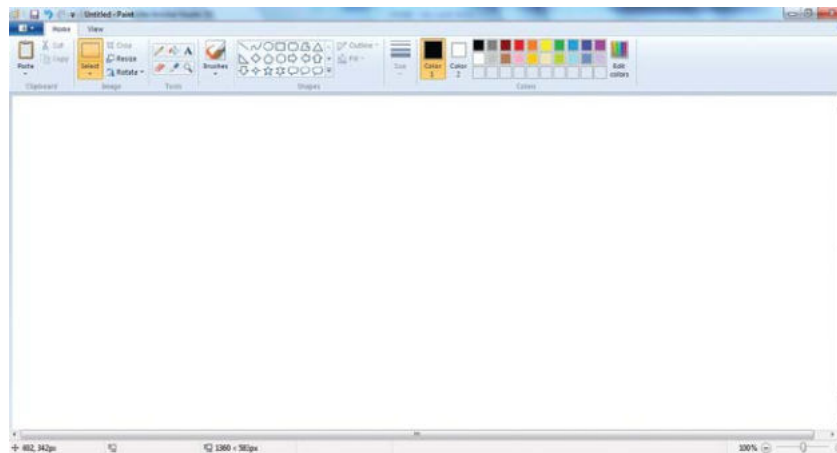
(C) Neat

(D) Dirty

16. Which one of the following parts of the computer named after an animal?



17. See the image given below. What do we call the blank area?



(A) Drawing Area

(B) Picture Area

(C) Playing Area

(D) Sleeping Area

18. Divanshi has to type her mother's phone number. Which keys will she use?

(A) Number keys and Spacebar

(B) Alphabet keys and Enter key

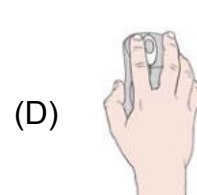
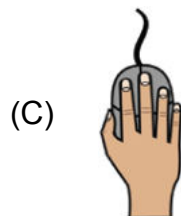
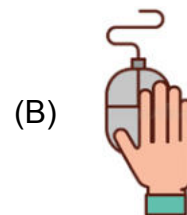
(C) Number keys

(D) Alphabet keys

19. My sister uses this machine to bake a cake for me. Which is it?



20. Which is the correct way to hold the mouse?



21. Which of the following is the “Fill with color” tool in MS Paint?



(C)

(D)



22. What is the name of a small arrow that moves on the monitor?

(A) Line

(B) Object

(C) Pointer

(D) Dot

23. I am a part of the computer which helps you to point things on the monitor. Identify me.

- (A) Monitor
- (B) Mouse
- (C) Speaker
- (D) CPU

24. Identify the type of computer.



- (A) Desktop Computer
- (B) Tablet
- (C) Laptop
- (D) Smartphone

25. Quickly pressing the left mouse button twice is called _____.

- (A) single-click
- (B) right-click
- (C) left-click
- (D) double-click

26. Choose the INCORRECT option.

Computers are used in _____.

- (A) Sports room
- (B) Computer Lab
- (C) Principal's Room
- (D) Library

27. Which of the following devices helps us to hear sounds?



28. Which of the following activities can be performed using a computer?



(C)



(D) All of these

29. Choose the correct steps to save a drawing in MS paint.

(A) Paint → Click on Save option → Type File Name → Click Save

(B) Paint → Type File Name → Click Save → Select Save option

(C) Paint → Click on File → Click on Open option → Type File Name → Click Open

(D) Paint → Type File Name → Click Open → Click on File → Select Save option

30. Which of the following statement is INCORRECT?

(A) A computer helps to type a letter.

(B) A computer works on its own.

(C) A computer takes less time to add numbers.

(D) A computer is a smart machine.

Acknowledgement

Copyright in this booklet is owned by Orange Education Pvt Ltd, unless otherwise indicated. Every effort has been made to trace and acknowledge copyright. Orange Education Pvt Ltd apologises for any accidental infringement and welcome information to redress the situation.

For more information, please visit our website: www.orangeeducation.in



Website: www.orangeeducation.in

