



# CYBER

School Level Examination

GRADE

3

**DO NOT OPEN THIS BOOKLET UNTIL INSTRUCTED TO DO SO**

- \* All questions are compulsory.
- \* Read the instructions on the **ANSWER SHEET** and fill in your **NAME, CLASS and OTHER INFORMATION.**

To mark your choice of answer by darkening the circles in the Answer Sheet, use an **HB Pencil** only.

- \* You **MUST** record your answers on the **ANSWER SHEET.**
- \* There are 30 **MULTIPLE CHOICE QUESTIONS.** Use the information provided to choose the **BEST** answer among the four possible options.

On your **ANSWER SHEET** fill in the oval that matches your answer.

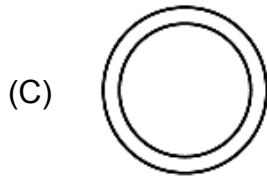
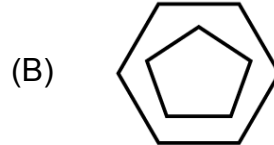
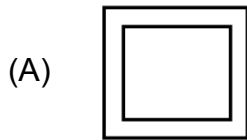
- \* Marks are **NOT** deducted for incorrect answers.
- \* Return the **Answer Sheet** to the invigilator at the end of the examination.
- \* Write your Roll No. on the Question Paper too and take it home for future reference.
- \* You are **NOT** allowed to use a calculator.

You may use a ruler and spare paper for rough work.

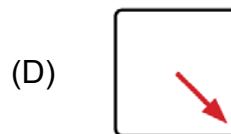
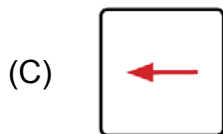
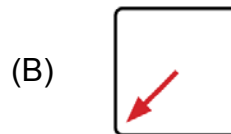
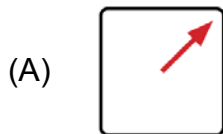

## Section - A

(This section contains 5 multiple choice questions. Each question has four choices (A), (B), (C) and (D), out of which only ONE is correct.)

1. Find the odd one out.



2. What comes next?



3. If the alphabets are written backwards, then which alphabet would be in the 9th position?

(A) I

(B) Q

(C) J

(D) R

4. I am a two-digit number. I have a four in the tens place. You say me when you count by twos. I am greater than 46. What number am I?

(A) 46

(B) 47

(C) 48

(D) 49

5. Cricket : Pitch :: \_\_\_\_\_

(A) Football : Ball

(B) Boxing : Ring

(C) Boat : Harbour

(D) Ship : Dock

## Section - B

(This section contains 25 multiple choice questions. Each question has four choices (A), (B), (C) and (D), out of which only ONE is correct.)

6. Which of the following device is used to store information?



7. These given statements tell us about a \_\_\_\_\_.

(i) Tiny hammers strike an ink ribbon against the paper.

(ii) The images and text are printed in the form of tiny dots.

(iii) They are very slow and the output is of a low quality.

(A) Barcode printer

(B) Dot-matrix printer

(C) Inkjet printer

(D) LED printer

8. What is the other name of starting or restarting a computer?

(A) Opening

(B) Programming

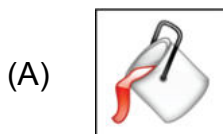
(C) Booting

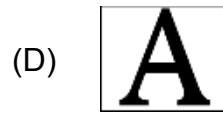
(D) Clicking

9. Which of the following is NOT a web browser?



10. Which of the following tools will be used to draw a flower in Paint?





11. Which of the following is an input device?



12. What is the result of PR 165<156?

(A) TRUE

(B) 9

(C) FALSE

(D) 10

13. In which year, the tabulating machine was invented?

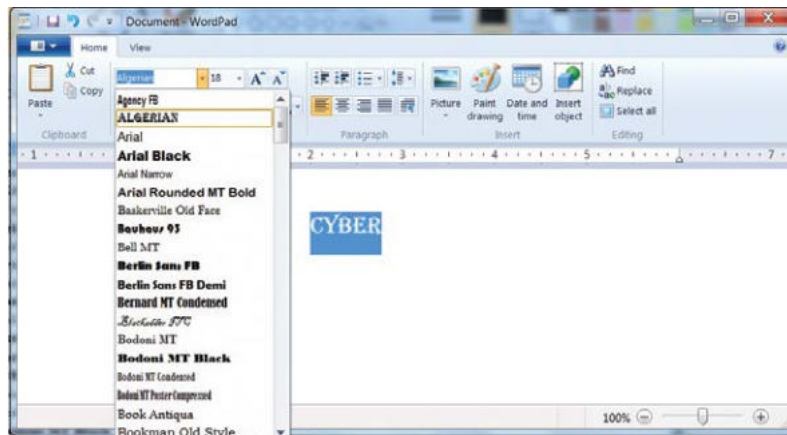
(A) 1889

(B) 1890

(C) 1990

(D) 1895

14. The given drop-down menu helps you to change the \_\_\_\_\_ of the font.



(A) Colour

(B) Length

(C) Style

(D) Size

15. Which of the following is NOT a microprocessor?

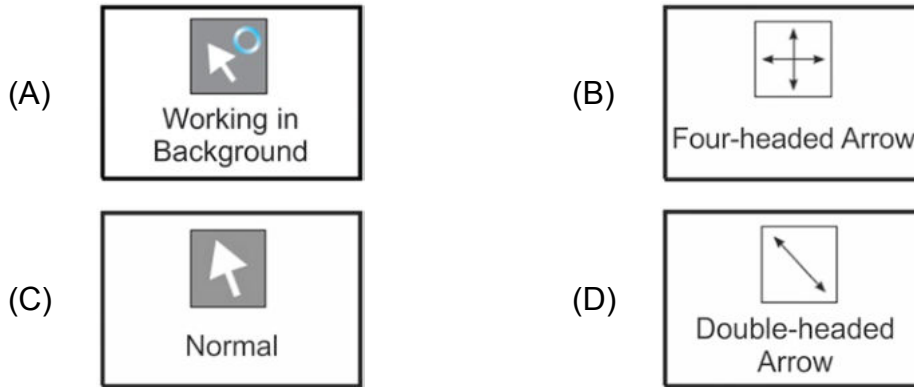
(A) Intel Core i7

(B) Intel Atom

(C) AMD Athlon

(D) AMD Xenon

16. Which of the following mouse pointers are used to resize a window?



17. Which of the following is NOT in the drop-down menu when you click the File tab in MS Word 2010?


- (A) Restore
- (B) New
- (C) Save As
- (D) Close

18. To open Microsoft Word, we

Select Start → All Programs → \_\_\_\_\_ → Microsoft Word

- (A) Accessories
- (B) Quick Access Toolbar
- (C) Microsoft Office
- (D) Maintenance

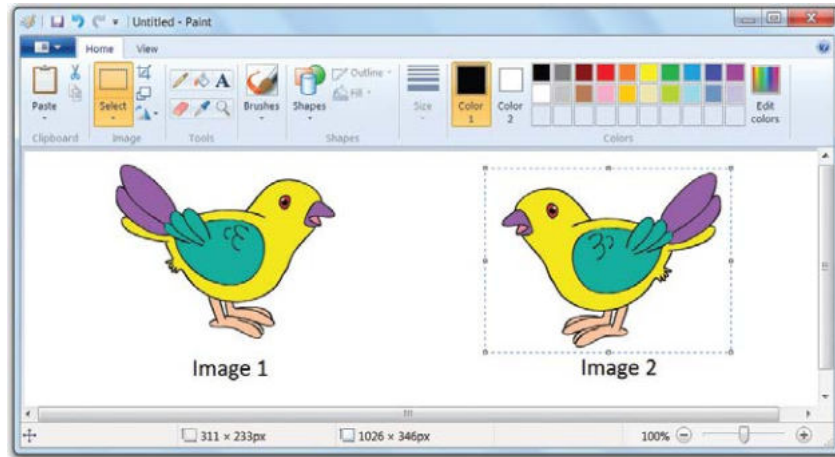
19. Which of the following key combinations when pressed together moves the cursor to the bottom of a document?



20. Which command is used for hiding the turtle from the screen?

- (A) RT
- (B) HT
- (C) LT
- (D) ST

21. Which of the given options in MS Paint will change Image-1 to Image-2?



- (A) Flip horizontal
- (B) Flip Vertical
- (C) Crop
- (D) Rotate 180°









22. What happens when you press the Ctrl key and the Esc key together?

- (A) All applications window minimizes
- (B) The Start menu opens
- (C) The icon refreshes
- (D) To switch between open programs

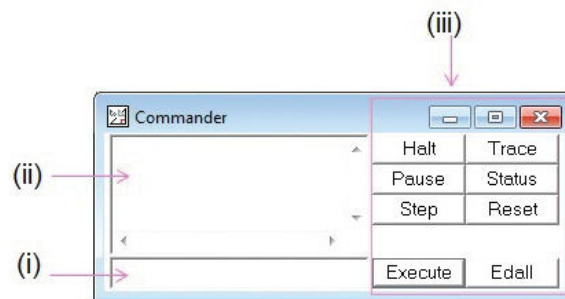
23. Which was the first electrical computer.



- (A) Pascaline
- (B) EDVAC
- (C) ENIAC
- (D) Analytical Engine

24. Choose the INCORRECT match.

- (A)  +  - To switch between open programs or windows
- (B)  +  - To undo an action
- (C)  +  - To move to the top of a document
- (D)  +  - To cut the selected text or item

25. Which of the following are the names of the components of the commander window?
- (A) Title Bar, Command Input Box  
 (B) Recall List Box, Command Input Box  
 (C) Title Bar, Menu Bar  
 (D) Recall List Box, Menu Bar
26. The Internet contains \_\_\_\_\_ of web pages created by people and companies around the world.
- (A) Billions (B) Thousands  
 (C) Lakhs (D) Millions
27. The components of the Commander Window in MSW Logo are labelled in the following screenshot. Identify the correct names from the given options.



- (A) (i)-Control Buttons, (ii)-Recall List Box, (iii)-Command Input Box  
 (B) (i)-Command Input Box, (ii)-Recall List Box, (iii)-Control Buttons  
 (C) (i)-Control Buttons, (ii)-Command Input Box, (iii)-Recall List Box  
 (D) (i)-Command Input Box, (ii)-Control Buttons, (iii)-Recall List Box
28. The steps to open a document in WordPad are given below. Identify the INCORRECT step.
- (A) Click on WordPad button.  
 (B) Click on the File in Open dialog box.  
 (C) Click on Save.  
 (D) Click on Open button.
29. What is the use of  +  keys?
- (A) Close the active window (B) Open the new document  
 (C) Lock your desktop (D) Searches a file or folder

30. What is the use of the given tool?



(A) Zoom image

(B) Fill color

(C) Rotate image

(D) Pick color



#### Acknowledgement

Copyright in this booklet is owned by Orange Education Pvt Ltd, unless otherwise indicated. Every effort has been made to trace and acknowledge copyright. Orange Education Pvt Ltd apologises for any accidental infringement and welcome information to redress the situation.

For more information, please visit our website: [www.orangeeducation.in](http://www.orangeeducation.in)



*Adding value to 'Education'*

Website: [www.orangeeducation.in](http://www.orangeeducation.in)

