



# CYBER

School Level Examination

GRADE

4

**DO NOT OPEN THIS BOOKLET UNTIL INSTRUCTED TO DO SO**

- \* All questions are compulsory.
- \* Read the instructions on the **ANSWER SHEET** and fill in your **NAME, CLASS and OTHER INFORMATION.**

To mark your choice of answer by darkening the circles in the Answer Sheet, use an **HB Pencil** only.

- \* You **MUST** record your answers on the **ANSWER SHEET.**
- \* There are 30 **MULTIPLE CHOICE QUESTIONS.** Use the information provided to choose the **BEST** answer among the four possible options.

On your **ANSWER SHEET** fill in the oval that matches your answer.

- \* Marks are **NOT** deducted for incorrect answers.
- \* Return the **Answer Sheet** to the invigilator at the end of the examination.
- \* Write your Roll No. on the Question Paper too and take it home for future reference.
- \* You are **NOT** allowed to use a calculator.

You may use a ruler and spare paper for rough work.

**Section - A**

(This section contains 5 multiple choice questions. Each question has four choices (A), (B), (C) and (D), out of which only ONE is correct.)

1. Find the odd one out.

(A)

(B)

*N*

(C)

(D)

*H*

2. Which cuboid has the maximum number of unit cubes?

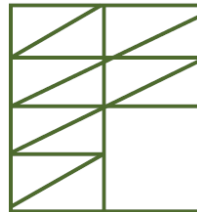
(A)  $10 \times 4 \times 1$

(B)  $10 \times 2 \times 2$

(C)  $20 \times 2 \times 1$

(D) Equal number of cubes.

3. Identify the figure that completes the pattern.



(A)




(B)



(C)



(D)



4. Fill in the blanks.

O O O X X X X X O O O X X X X O O O X X X O \_ \_ \_ X O O O X

(A) O O O

(B) O X X

(C) O O X

(D) X X O

5. What is the answer of the given division statements?

$10 \div 10$

$4 \div 4$

$25 \div 25$

(A) 1

(B) 25

(C) 4


(D) 10

**Section - B**

(This section contains 25 multiple choice questions. Each question has four choices (A), (B), (C) and (D), out of which only ONE is correct.)

6. Which of the following is the INCORRECT URL?

- (A) <https://www.indiabixcom/>
- (B) <https://www.google.com/>
- (C) <https://www.orangeeducation.in/index.html>
- (D) <https://www.msn.com/en-in>

7.  is a/an \_\_\_\_\_ device.

- (A) Input
- (B) Output
- (C) Storage
- (D) Processing

8. The steps to cut and paste text are given below but the steps got jumbled up. Select the correct order of these steps.

- (i) Position the cursor at the location where you want to paste the text.
- (ii) Select the text.
- (iii) In the Clipboard group, click on Cut.
- (iv) Click on Home tab.
- (v) Click on Paste from the Clipboard group.

- (A) (ii), (iii), (iv), (v), (i)
- (B) (i), (ii), (iii), (iv), (v)
- (C) (iv), (iii), (ii), (i), (v)
- (D) (ii), (iv), (iii), (i), (v)

9. When was the Intel 4004 microprocessor introduced?

- (A) 1871
- (B) 1971
- (C) 1972
- (D) 1981

10. Which of the following file formats can be added to a slide show of a presentation?

- (A) .bmp
- (B) .mp4
- (C) .gif
- (D) All of these

11. Which software controls and co-ordinates the overall activities of the computer?

- (A) WordPad
- (B) Application
- (C) Notepad
- (D) System

12. Which of the following services let you share files and photos with anyone, even if that person doesn't have an account?



13. Identify the logo.



(A) Social Networking

(B) E-commerce

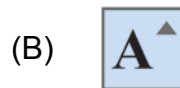
(C) Web Browser

(D) Business Networking

14. In MS PowerPoint, which of the following commands adds a new slide?



15. Which if the following commands is used to change the font style?



16. Which of the following was the first calculator that could perform all four arithmetic operations?

(A) Pascaline

(B) Leibniz's Step Reckoner

(C) Tabulating Machine

(D) UNIVAC

17. In MS Word, which of the following tool is used to change the colour behind the selected text or paragraph in the table?



18. What is the shortcut to run a PowerPoint slideshow?
- (A) F1 (B) F2  
(C) F4 (D) F5
19. Which of the following devices helps us to send data over the internet?
- (A) Modem (B) Monitor  
(C) CPU (D) RAM
20. Which generation of computers were based on integrated circuits?
- (A) First (B) Second  
(C) Third (D) Fourth
21. What does Internet stand for?
- (A) Interface Network (B) International Network  
(C) Information Networking (D) Interconnected Network
22. Some statements about the Operating System are given below. Which of the following statements is INCORRECT?
- (A) It does not control devices such as printer, speakers, etc.  
(B) It recognises input from the keyboard.  
(C) It keeps track of files on the hard disk.  
(D) It sends output to the display screen.
23. Which of the following statements is INCORRECT for the given icon in MS Word?



- (A) Change the spacing between the lines of the text or paragraph.  
(B) Add or remove the horizontal space between lines of text in a paragraph.  
(C) Add or remove the vertical space between lines of text in a paragraph.



(C) UNIX

(D) Palm OS

#### Acknowledgement

Copyright in this booklet is owned by Orange Education Pvt Ltd, unless otherwise indicated. Every effort has been made to trace and acknowledge copyright. Orange Education Pvt Ltd apologises for any accidental infringement and welcome information to redress the situation.

For more information, please visit our website: [www.orangeeducation.in](http://www.orangeeducation.in)



*Adding value to 'Education'*

Website: [www.orangeeducation.in](http://www.orangeeducation.in)

