



# FINANCE

School Level Examination

GRADE

1

**DO NOT OPEN THIS BOOKLET UNTIL INSTRUCTED TO DO SO**

- \* All questions are compulsory.
- \* Read the instructions on the **ANSWER SHEET** and fill in your **NAME, CLASS and OTHER INFORMATION.**

To mark your choice of answer by darkening the circles in the Answer Sheet, use an **HB Pencil** only.

- \* You **MUST** record your answers on the **ANSWER SHEET.**
- \* There are 30 **MULTIPLE CHOICE QUESTIONS.** Use the information provided to choose the **BEST** answer among the four possible options.

On your **ANSWER SHEET** fill in the oval that matches your answer.

- \* Marks are **NOT** deducted for incorrect answers.
- \* Return the **Answer Sheet** to the invigilator at the end of the examination.
- \* Write your Roll No. on the Question Paper too and take it home for future reference.
- \* You are **NOT** allowed to use a calculator.





You may use a ruler and spare paper for rough work.

(This paper contains 30 multiple choice questions. Each question has four choices (A), (B), (C) and (D), out of which only ONE is correct).





1. In which year were the new coins made in many fun shapes?

- (A) 1864 (B) 1964  
(C) 1955 (D) 1960

2. Which of the following is an example of a natural thing?

- (A)  (B) 
- (C)  (D) 

3. Which of the following is the shape of a ₹ 50 note?

- (A)  (B) 
- (C)  (D) 

4. Rupee notes are made up of \_\_\_\_\_.

- (A) Plastic (B) Paper  
(C) Cloth (D) Iron

5. How much money is in the box?



- (A) ₹ 50  
(B) ₹ 70  
(C) ₹ 80  
(D) ₹ 82

6. Identify the person given in the picture.



- (A) Teacher  
(B) Doctor  
(C) Soldier  
(D) Postman

7. Choose the INCORRECT statement.

- (A) We should use money only when we need it.  
(B) We cannot buy a house with money.  
(C) We can keep money in a piggy bank.  
(D) We should spend the money at the right time and place.

8. Which of these numbers is not a currency note in India?

- (A) Twenty  
(B) Fifty  
(C) Thirty  
(D) Ten

9. What is the colour of the new ₹ 50 note in India?

- (A) Purple  
(B) Orange  
(C) Blue  
(D) Black

10. Which of these is a two rupee coin?



11. Money comes in the form of \_\_\_\_\_.
- (A) Coins (B) Notes  
(C) Clothes (D) Both (A) and (B)
12. Prachi was \_\_\_\_\_ to her father because he gave her money to buy pencils.
- (A) Regret (B) Graceful  
(C) Trustful (D) Thankful
13. Which of the following is used to pay money with the help of a machine?
- (A) Debit card (B) Club card  
(C) Aadhar card (D) Visiting card
14. What is the shape of the following currency note?



- (A) Rubber money (B) Plastic money  
(C) Paper money (D) Metal money
15. Man-made things are made by \_\_\_\_\_.
- (A) Animal (B) Man  
(C) Nature (D) Birds
16. Which of these coins has the highest value?
- (A) Annas (B) Naya Paisa  
(C) One rupee (D) Pice

17. If you score good marks and your grandparents appreciate your hard work, what will you say to them?
- (A) Sorry (B) Thank you  
(C) Please (D) None of these
18. What does Rishi needs to buy a bar of chocolate?
- (A) Paper (B) Money  
(C) Fruits (D) Plastic
19. Arun's mother bought a packet of crayons of ₹ 20 and a ball of ₹ 10. How much did his mother spend?
- (A) (B) ₹ 20  
(C) (D) ₹ 40
20. Which of the following is the best way to spend money?
- (A) Save all the money you have.  
(B) Use all the money at once.  
(C) Use some of the money and save some of the money.  
(D) None of the above is correct
21. Who grows food for us?
- (A) Postman (B) Farmer  
(C) Doctor (D) Chef
22. Which of these is available in the form of note as well as a coin?
- (A) ₹ 10 (B) ₹ 50  
(C) ₹ 200 (D) ₹ 500
23. Rajesh cleared the table after dinner for which his mother gave him ten rupees. Rajesh also polished his father's shoes for which he got ten rupees more. How much total amount of money did he receive from his parents?
- (A) Ten (B) Twenty  
(C) Twenty-five (D) Thirty
24. Given picture is an example of a \_\_\_\_\_.



- (A) Man-made thing (B) Natural thing  
 (C) Both (A) and (B) (D) None of the above

25. Choose the INCORRECT statement.




- (A) Coins are circular in shape.  
 (B) Paper notes are made with paper.  
 (C) It is not easy to store coins.  
 (D) You can buy chocolate with money.

26. Identify the given coin.



- (A) One Paise (B) Two Paise  
 (C) Three Paise (D) One Rupee

27. Match the following currencies given in Column I with their picture given in Column II.

Column I	Column II
1. ₹ 2000	a. 
2. ₹ 20	b. 
3. ₹ 200	c. 

- (A) 1.-a., 2.-b., 3.-c. (B) 1.-b., 2.-c., 3.-a.  
 (C) 1.-a., 2.-c., 3.-b. (D) 1.-b., 2.-a., 3.-c.

28. A doctor charges fees for giving us medicine. What do we use to pay him?

(A) Clothes

(B) Books

(C) Rice

(D) Money

29. Value of two



notes is equal to \_\_\_\_\_.

(A)

(B) ₹ 200

(C)

(D) ₹ 500

30. Find the odd one out.

(A)



(B)



(C)



(D)



#### Acknowledgement

Copyright in this booklet is owned by Orange Education Pvt Ltd, unless otherwise indicated. Every effort has been made to trace and acknowledge copyright. Orange Education Pvt Ltd apologises for any accidental infringement and welcome information to redress the situation.

For more information, please visit our website: [www.orangeeducation.in](http://www.orangeeducation.in)



Website: [www.orangeeducation.in](http://www.orangeeducation.in)

