



FINANCE

School Level Examination

GRADE

2

DO NOT OPEN THIS BOOKLET UNTIL INSTRUCTED TO DO SO

- * All questions are compulsory.
- * Read the instructions on the **ANSWER SHEET** and fill in your **NAME, CLASS and OTHER INFORMATION**.

To mark your choice of answer by darkening the circles in the Answer Sheet, use an **HB Pencil** only.

- * You **MUST** record your answers on the **ANSWER SHEET**.
- * There are 30 **MULTIPLE CHOICE QUESTIONS**. Use the information provided to choose the **BEST** answer among the four possible options.


On your **ANSWER SHEET** fill in the oval that matches your answer.

- * Marks are **NOT** deducted for incorrect answers.
- * Return the **Answer Sheet** to the invigilator at the end of the examination.
- * Write your Roll No. on the Question Paper too and take it home for future reference.
- * You are **NOT** allowed to use a calculator.

You may use a ruler and spare paper for rough work.

(This paper contains 30 multiple choice questions. Each question has four choices (A), (B), (C) and (D), out of which only ONE is correct).

The cost of each item is given below. Use them to answer the questions 1 and 2.



- How much money is required to buy 1 pouch and 1 cap?
 (A) ₹ 32 (B) ₹ 67
 (C) ₹ 62 (D) ₹ 65
- Nitika Spent ₹ 50. Which two items did she buy?
 (A) Ball and Cap (B) Cap and Pouch
 (C) Pouch and Crayon (D) Ball and Crayon
- When we remove some money from a lot of money, we are _____.
 (A) Counting money (B) Adding money
 (C) Subtracting money (D) Removing money
- Choose the INCORRECT statement.

<p>(A)</p> <div style="border: 1px solid black; padding: 5px; display: inline-block;"> <p>A bunch of grapes for ₹ 30</p> </div>	<p>(B)</p> <div style="border: 1px solid black; padding: 5px; display: inline-block;"> <p>3 bananas for ₹ 15</p> </div>
<p>(C)</p> <div style="border: 1px solid black; padding: 5px; display: inline-block;"> <p>4 apples for ₹ 40</p> </div>	<p>(D)</p> <div style="border: 1px solid black; padding: 5px; display: inline-block;"> <p>2 oranges for ₹ 16</p> </div>

- The cost of different things would be _____.
 (A) Same (B) Different
 (C) Equal (D) None of above
- In an Indian currency note, the amount is written in _____.
 (A) English (B) Hindi

(C) 17 languages

(D) Hindu-Arabic numbers



(A)

(B) ₹ 200

(C)

(D) ₹ 500

8. Choose the place where money is used.

(A) Railway stations

(B) Hospital

(C) Both (A) and (B)

(D) None of above

9. What should we say when someone gives us something?


(A) Sorry

(B) Bye

(C) Always

(D) Thank you

10. Namish has ₹ 18. He wants to buy three pencils. Each pencil cost ₹ 5. Does he have enough money?



(A) Yes

(B) No

(C) May be

(D) Don't know

11. Dhanesh's parents bought movie tickets for all to watch the latest movie. Where did they buy the tickets from?

(A) Airport

(B) Cinema Hall

(C) Railway Station

(D) Bank

12. _____ is the money we give in exchange of things we need.


(A) Coin

(B) Note

(C) Income

(D) Expenses

The cost of the following vegetables are given below. Answer the question numbers 13 and 14.



13. How much money is required to purchase all the vegetables?

- (A) ₹ 40 (B) ₹ 90
(C) ₹ 100 (D) ₹ 120

14. What is the cost of one kg cauliflower?

- (A) 4 kg tomatoes (B) 1 kg capsicum
(C) 2 kg tomatoes (D) 3 kg lady finger

15. Which of the following cannot be bought using money?

- (A) Pencil (B) Clothes
(C) Candy (D) Blessings

16.  -  -  = ?

- (A) ₹ 30 (B) ₹ 30
(C) ₹ 70 (D) ₹ 70

17. Namita gave ₹ 30 to the auto driver. She also spent three rupees on candy and five rupees on chips. How much money did she spend in total?

- (A) ₹ 35 (B) ₹ 35
(C) ₹ 38 (D) ₹ 38

18. Himani has some money in her piggy bank as shown below. How much money does she have in her piggy bank?



- (A) ₹ 25 (B) ₹ 26
(C) ₹ 27 (D) ₹ 30

19. Select the INCORRECT statement.

- (A) Do not write on notes.
- (B) Check for the price before buying.
- (C) We should tear the notes.
- (D) Always make a list of things we want to buy.

20. Charu went to the shopping mall with her mother. She bought a kurti for ₹ 1100 and a video game for ₹ 900. Find the total money spent by them.

- (A) (B) ₹ 1100
- (C) (D) ₹ 2000

21. Which of the following item's cost is equal to the value of four ₹ 50 notes?



22. Money in the form of paper is known as _____.

- (A) Coins (B) Notes
- (C) Virtual money (D) Plastic money



- (A) ₹ 50 (B) ₹ 51
- (C) ₹ 52 (D) ₹ 501

24. My mother bought vegetables for ₹ 25. She paid ₹ 30 to the shopkeeper. How much money will she get in return?

- (A) (B) ₹ 10
- (C) (D) ₹ 20

25. Ridhima has two ₹ 100 notes, one ₹ 50 note, one ₹ 200 note and five ₹ 10 coins in her piggy bank. How much money does she save?

- (A) (B) ₹ 360

(C) (D) ₹ 550

26. Sakshi has ₹ 12. If she buys a packet of biscuit for ₹ 10, how much money is left with her?



(A) (B) ₹ 2
(C) (D) ₹ 4

27. Money is available in various forms such as _____.

(A) Metal (B) Paper
(C) Plastic cards (D) All of the above

28. Preeti has ₹ 100. She buys a candy for ₹ 5, chips for ₹ 20, biscuit for ₹ 10 and juice for ₹ 20. How much total money did she spend?

(A) (B) ₹ 50
(C) (D) ₹ 65

29. If we do not use fresh milk in a day or two, the milk will _____.

(A) Become tastier (B) Remain fresh
(C) Get spoilt and go to waste (D) None of the above

30. Choose the option in which the notes are arranged in descending order.

(A) (B) (C) (D)

Acknowledgement

Copyright in this booklet is owned by Orange Education Pvt Ltd, unless otherwise indicated. Every effort has been made to trace and acknowledge copyright. Orange Education Pvt Ltd apologises for any accidental infringement and welcome information to redress the situation.

For more information, please visit our website: www.orangeeducation.in



Website: www.orangeeducation.in

