



SCIENCE

School Level Examination

GRADE

1

DO NOT OPEN THIS BOOKLET UNTIL INSTRUCTED TO DO SO

- * All questions are compulsory.
- * Read the instructions on the **ANSWER SHEET** and fill in your **NAME, CLASS and OTHER INFORMATION.**

To mark your choice of answer by darkening the circles in the Answer Sheet, use an **HB Pencil** only.

- * You **MUST** record your answers on the **ANSWER SHEET.**
- * There are 30 **MULTIPLE CHOICE QUESTIONS.** Use the information provided to choose the **BEST** answer among the four possible options.

On your **ANSWER SHEET** fill in the oval that matches your answer.


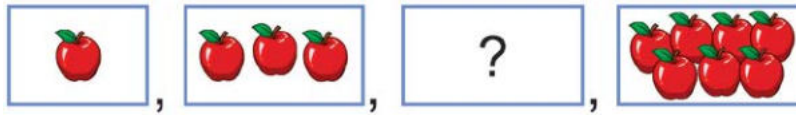
- * Marks are **NOT** deducted for incorrect answers.
- * Return the **Answer Sheet** to the invigilator at the end of the examination.
- * Write your Roll No. on the Question Paper too and take it home for future reference.
- * You are **NOT** allowed to use a calculator.

You may use a ruler and spare paper for rough work.

Section - A

(This section contains 5 multiple choice questions. Each question has four choices (A), (B), (C) and (D), out of which only ONE is correct.)

1. What will come next in the given series?



2. Choose the correct option.

1, 22, 333, __?, 55555

(A) 4444

(B) 8888

(C) 44

(D) 444

3. Saurabh is Preeti's grandmother's son. What is Preeti's relation with Saurabh?

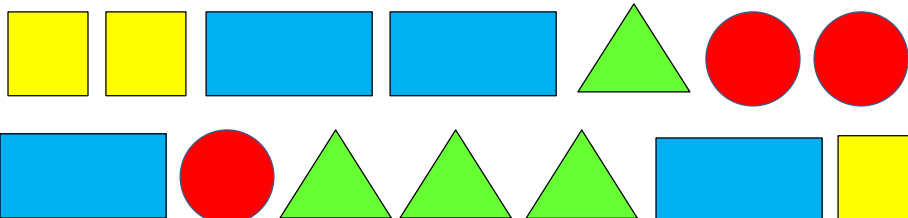
(A) Aunt

(B) Sister

(C) Daughter

(D) Mother

4. There are _____ more triangles than rectangles.



(A) 2

(B) 4

(C) 1

(D) 0

5. Find the missing number.

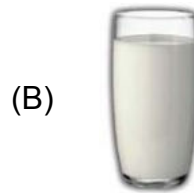
| | |
|----|----|
| 5 | 15 |
| 10 | ? |

- (A) 12 (B) 14
(C) 20 (D) 25

Section - B

(This section contains 25 multiple choice questions. Each question has four choices (A), (B), (C) and (D), out of which only ONE is correct.)

6. Which of the following comes under the category of Junk Food?



(D) None of the above

7. The music played on the radio is very good.






Music calms my _____.

- (A) Tongue (B) Eyes
(C) Ears (D) Hands

8. Rahul has four cousins, two aunts, two uncles along with his parents and grandparents. How many total members are there in his family?

- (A) 8 (B) 12
(C) 10 (D) 13


9. Which of the following fruit contains maximum amount of water?



10. Which of the following is not worn in summers?



11. Which of the following is not kept in the kitchen?




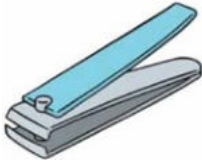






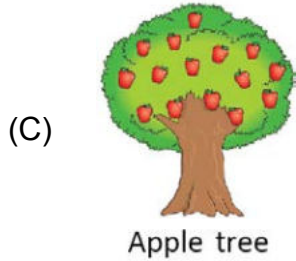

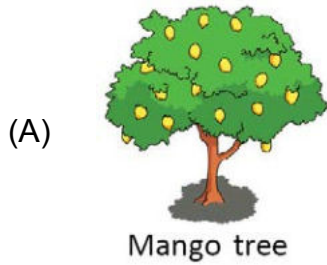
12. I am the king of all fruits. Who am I?



13. The colour of our teeth is _____.
- (A) Green (B) Black
(C) White (D) Red
14. What do we see in the sky at night?
- (A) Mars (B) Venus
(C) Moon (D) Sun
15. Cockroaches reproduce by giving _____.
- (A) big cockroaches (B) small cockroaches
(C) eggs (D) All of these
16. The given house is made up of _____.



- (A) Stones (B) Wood
(C) Brick (D) Bamboo
17. What must be used for cutting nails?
- (A)  (B) 
(C)  (D) 
18. The given picture of animals comes under the group of _____.
-    
- (A) Birds (B) Reptiles
(C) Insects (D) All of these
19. _____ is used in making medicines.



(D) All of these

20. Sometimes, after the rain, a band of seven colours appears in the sky. It is called a _____.

(A) Painting Canvas

(B) Paint brush

(C) Rainbow

(D) None of these

21. Study the table carefully and give suitable headings to the groups P and Q.

| Group P | Group Q |
|-------------|------------|
| Banana Tree | Television |
| Frog | Swing |
| Papaya Tree | Airplane |

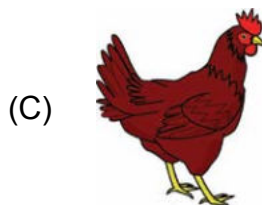

(A) Non-living, living

(B) Fruits, plants

(C) Plants, animals

(D) Living, non-living

22. Which of these animals does not eat grains?



(D) Both (B) and (C)

23. Choose the wrong habit out of the following.





(A) Washing your hands before and after meal.

- (B) Completing your homework.
- (C) Running in the corridors of the school.
- (D) Following traffic signals.




24. Choose the CORRECT statement.

- (A) We should carry a raincoat while going out in Sun.
- (B) We should wear woollen clothes in summer.
- (C) We should carry an umbrella in rainy season.
- (D) All of these

25. Pick the odd one out.

- | | |
|--|---|
| (A)  | (B)  |
| (C)  | (D)  |

26. Water can be stored in _____.

- | | |
|---|--|
| (A)  | (B)  |
| (C)  | (D) All of these |

27. Rekha likes to wear woollen clothes during winter season because they keep her _____.

- | | |
|---------|----------|
| (A) Wet | (B) Cool |
| (C) Dry | (D) Warm |

28. Which of the following statement is INCORRECT?

- (A) Without air, we can die.

- (B) We breathe in oxygen.
 - (C) We can see air with our eyes.
 - (D) We cannot see air with our eyes but we can feel it.
29. Tarun is writing an essay on the topic - 'Cow' by using his _____.
- (A) Ears
 - (B) Nose
 - (C) Tongue
 - (D) Fingers
30. Aakash has kept Plant A on his terrace and Plant B in a sealed glass jar for a week. What will happen to the plants after one week?
- (A) Only Plant B will grow well.
 - (B) Only Plant A will grow well.
 - (C) Both the plants will grow well.
 - (D) Both the plants will die.

Acknowledgement

Copyright in this booklet is owned by Orange Education Pvt Ltd, unless otherwise indicated. Every effort has been made to trace and acknowledge copyright. Orange Education Pvt Ltd apologises for any accidental infringement and welcome information to redress the situation.

For more information, please visit our website: www.orangeeducation.in



Adding value to 'Education'

Website: www.orangeeducation.in

