



SCIENCE

School Level Examination

GRADE

2

DO NOT OPEN THIS BOOKLET UNTIL INSTRUCTED TO DO SO

- * All questions are compulsory.
- * Read the instructions on the **ANSWER SHEET** and fill in your **NAME, CLASS and OTHER INFORMATION**.
- To mark your choice of answer by darkening the circles in the Answer Sheet, use an **HB Pencil** only.
- * You **MUST** record your answers on the **ANSWER SHEET**.
- * There are 30 **MULTIPLE CHOICE QUESTIONS**. Use the information provided to choose the **BEST** answer among the four possible options.
- On your **ANSWER SHEET** fill in the oval that matches your answer.
- * Marks are **NOT** deducted for incorrect answers.
- * Return the **Answer Sheet** to the invigilator at the end of the examination.
- * Write your Roll No. on the Question Paper too and take it home for future reference.
- * You are **NOT** allowed to use a calculator.

You may use a ruler and spare paper for rough work.

Section - A

(This section contains 5 multiple choice questions. Each question has four choices (A), (B), (C) and (D), out of which only ONE is correct.)

1. Choose the correct option.

See : Eye :: Taste : ?





- (A) Tongue (B) Feet
(C) Elbow (D) Palm

2. Fill in the blank with suitable option.

4, 8, 12, 16, _____, 24, 28

- (A) 18 (B) 22
(C) 20 (D) 21

3. I have four sides which are equal. Which shape am I?

- (A)  (B) 
(C)  (D) 

4. Mamta gave 20 chocolates to her 2 kids. She gave 11 chocolates to her son. How many chocolates did she give to her daughter?

- (A) 7 (B) 8
(C) 9 (D) 10

5. Which of the following is the missing shape?





- (A)  (B) 
(C)  (D) None of these

Section - B

(This section contains 25 multiple choice questions. Each question has four choices (A), (B), (C) and (D), out of which only ONE is correct.)

6. In which of the following activities, bones and muscles are used the least?



7. After eating junk food, Neelam got loose motions. She may have problem with her _____.

(A) Stomach

(B) Kidney

(C) Lungs

(D) Eyes

8. Which of the following helps the plants to grow better?

(A) Leather

(B) Manure

(C) Fibre

(D) None of these

9. Raj was playing in the garden outside his home. He saw a large hole on the ground beneath a tree. Whose hole it could be?



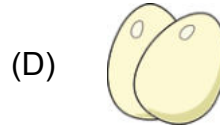


(A) Giraffe

(B) Dog

(C) Cat

(D) Rabbit

10. Which of the following is an instant source of energy?



11. In which festival, people light candles and diyas in front of their houses?


(A) Holi

(B) Eid

(C) Christmas

(D) Diwali

12. Which of the following house gives protection from extreme cold?



13. Pick the odd one in each group and then select the correct set.

(i) **Truck, Bus, Car, Aeroplane**

(ii) **Television, Cell Phone, Book, Computer**



(A) Bus, Cell Phone

(B) Aeroplane, Book

(C) Car, Computer

(D) Truck, Television

14. Which of the following gives us milk?



15. Vinod likes to eat when he goes outside. Identify the food that he should eat.

(A)



(B)



(C)



(D)



16. Choose the INCORRECT statement.

(A) Fruits give us energy.

(B) A heavy meal taken in the morning is known as breakfast.

(C) Junk Food is rich in proteins thus provide us energy.

(D) Milk is the source of calcium.

17. Pick the ODD one out.

(A)



(B)



(C)



(D)



18. Which of the following animal is NOT given in the word search?

G	O	H	T	M	G	M	B
E	C	O	W	L	O	K	I
E	L	E	P	H	A	N	T
T	I	R	A	T	T	N	E
A	O	S	T	I	G	E	R
M	N	H	O	R	S	E	S

(A) Horse

(B) Tiger

(C) Elephant

(D) Camel

19. Choose the statement that gives the best description of both the images.




- (A) These plants have trunks.
- (B) These plants have weak stems but grow on ground.
- (C) These plants have woody stems.
- (D) These plants have weak stems and they need support to grow.

20. Which of the following is used to run trains?



- | | |
|----------|-----------|
| (A) Coal | (B) Paper |
| (C) Wood | (D) Sand |

21. Animals like lion, tiger, and leopard belong to which family of animals?



- | | |
|--------------|---------|
| (A) Rat | (B) Dog |
| (C) Elephant | (D) Cat |

22. _____ light on the traffic signal indicates that people can cross the road using zebra crossing.



- (A) Red (B) Green
(C) Yellow (D) Pink

23. I am a mineral. You like to apply me on your body after bath, especially in summers. Which mineral am I?

- (A) Salt (B) Chalk
(C) Coal (D) Talc

24. Match the following.

Column I	Column II
(p) Crackers	(i) Holi
(q) Christmas Tree	(ii) Id
(r) Gulal	(iii) Diwali
(s) Seviyan	(iv) Christmas

- (A) (p)-(i), (q)-(ii), (r)-(iv), (s)-(iii) (B) (p)-(iii), (q)-(iv), (r)-(i), (s)-(ii)
(C) (p)-(ii), (q)-(iii), (r)-(i), (s)-(iv) (D) (p)-(iii), (q)-(ii), (r)-(i), (s)-(iii)

25. I am a vegetable and my leaves are used in the food. Who am I?

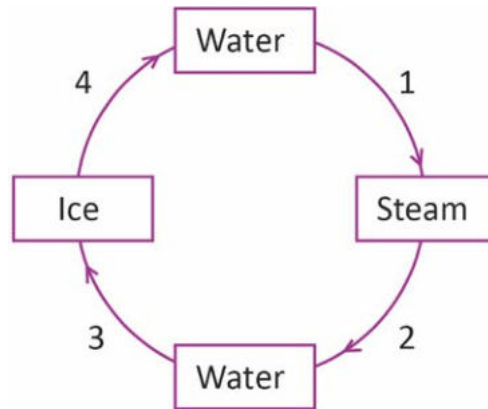
- (A) Cauliflower (B) Cabbage
(C) Broccoli (D) Brinjal

26. This is a hot air balloon, big enough to carry few people. It goes up in the sky because _____.



- (A) People in its basket take it up in the sky.
- (B) Hot air in it makes it to go up in the sky.
- (C) People help it to go up in the sky.
- (D) Wind help it to go up in the sky.

27. What do the numbers 1, 2, 3 and 4 indicate?



- (A) 1-Freeze, 2-Cool, 3-Heat, 4-Freeze
- (B) 1-Heat, 2-Heat, 3-Heat, 4-Heat
- (C) 1-Heat, 2-Cool, 3-Freeze, 4-Heat
- (D) 1-Cool, 2-Freeze, 3-Cool, 4-Cool

28. We should _____ to reduce Air Pollution.

- (A) drink lots of water
- (B) plant trees
- (C) not play outdoor games
- (D) None of the above

29. Read the following statements and identify the food group that Amit is eating.

Amit has returned after playing. His mother gave him a glass of milk to drink and sprouts to eat.

- (A) Amit is eating only body-building food.
- (B) Amit is eating only protective food.

(C) Amit is eating only energy-giving food.

(D) Amit is eating both energy-giving and body-building food.

30. _____ provides support to the plant and store food, water and nutrients.

(A) Stem

(B) Root

(C) Fruit

(D) Leaf

Acknowledgement

Copyright in this booklet is owned by Orange Education Pvt Ltd, unless otherwise indicated. Every effort has been made to trace and acknowledge copyright. Orange Education Pvt Ltd apologises for any accidental infringement and welcome information to redress the situation.

For more information, please visit our website: www.orangeeducation.in



Website: www.orangeeducation.in

