



SCIENCE

School Level Examination

GRADE

3

DO NOT OPEN THIS BOOKLET UNTIL INSTRUCTED TO DO SO

- * All questions are compulsory.
- * Read the instructions on the **ANSWER SHEET** and fill in your **NAME, CLASS and OTHER INFORMATION.**

To mark your choice of answer by darkening the circles in the Answer Sheet, use an **HB Pencil** only.

- * You **MUST** record your answers on the **ANSWER SHEET.**
- * There are 30 **MULTIPLE CHOICE QUESTIONS.** Use the information provided to choose the **BEST** answer among the four possible options.

On your **ANSWER SHEET** fill in the oval that matches your answer.

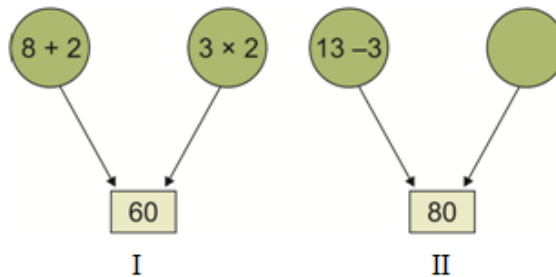
- * Marks are **NOT** deducted for incorrect answers.
- * Return the **Answer Sheet** to the invigilator at the end of the examination.
- * Write your Roll No. on the Question Paper too and take it home for future reference.
- * You are **NOT** allowed to use a calculator.

You may use a ruler and spare paper for rough work.

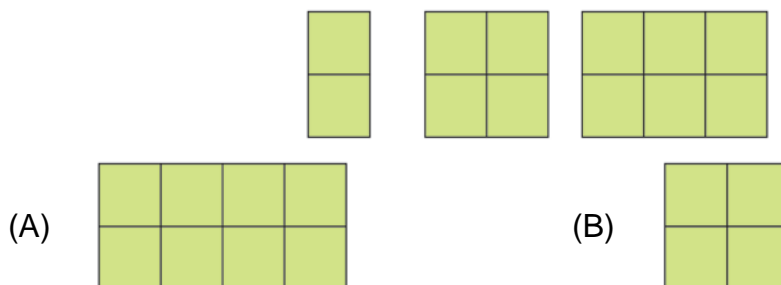
Section - A

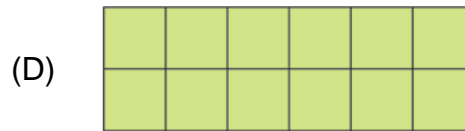
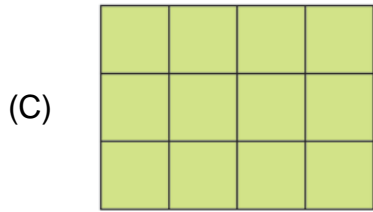
(This section contains 5 multiple choice questions. Each question has four choices (A), (B), (C) and (D), out of which only ONE is correct.)

1. What number comes next in the sequence below?
2, 5, 9, 14, ?
(A) 16 (B) 13
(C) 14 (D) 20
2. If A is shorter than H, R is taller than Z and H is shorter than Z, who will be the tallest?
(A) H (B) Z
(C) R (D) A
3. Observe figure I carefully. Use the same rule to solve figure II.



- (A) $4 - 4$ (B) $4 - 3$
(C) $4 + 4$ (D) 4×4
4. Which letter appears in SCENE but not in SEEN?
(A) E (B) C
(C) N (D) S
5. Which figure comes next in the given pattern?

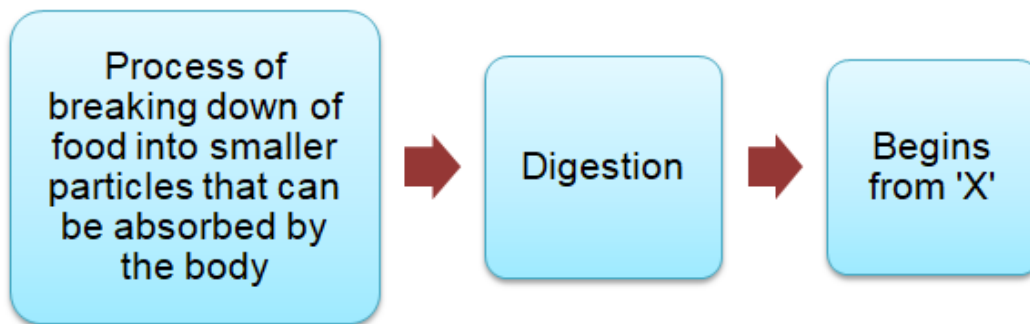




Section - B

(This section contains 25 multiple choice questions. Each question has four choices (A), (B), (C) and (D), out of which only ONE is correct.)

6. Look at the given chart and label the term X.



- (A) Esophagus
- (B) Mouth
- (C) Stomach
- (D) Small intestine

7. Which of the following can increase the amount of oxygen in the atmosphere?

- (A) Cutting down trees
- (B) Playing outdoor
- (C) Planting lots of trees
- (D) None of the above

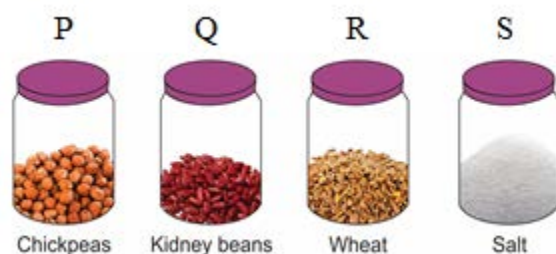
8. Choose the CORRECT statement about green plants.

- (A) They have green blood cells
- (B) They use less water than animals
- (C) Their cells have chlorophyll
- (D) Their cells have organ system

9. Choose the correct option that represents the muscular force.

- (A) Lifting a bucket full of water.
- (B) Walking to the playground.
- (C) Kicking a football.
- (D) All of the above

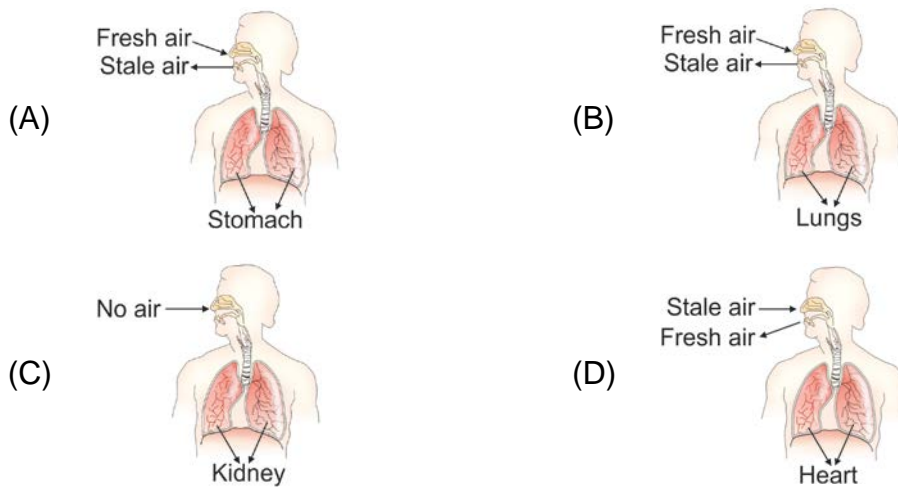
10. Identify the jar that does NOT have seeds.





- (A) Plants require nitrogen to prepare their food.
- (B) Plants require sunlight to prepare their food.
- (C) Chlorophyll present in plants helps in the process of photosynthesis.
- (D) Plants maintain balance in the nature.

14. Choose the correct option.



15. Which of the following is an example of an herbivore?

- (A) Crocodile
- (B) Eagle
- (C) Wolf
- (D) Elephant

16. Unjumble the given letters and find which category it belongs to.


I	T	A	V	M	N	I
---	---	---	---	---	---	---

- (A) Energy-giving food
- (B) Junk food
- (C) Body-building food
- (D) Protective food

17. While reading the Science Book, Hema saw an image of a ship. Which mode of transport is it?

- (A) Air Transport (B) Water Transport
(C) Road Transport (D) None of the Above

18. Which of the following cannot live in water?



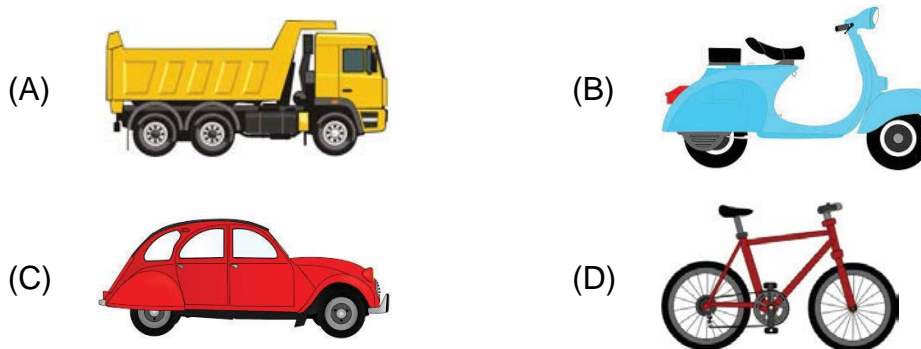
19. What is the use of high roofs and good ventilation?

- (A) To keep the house hot in autumn season
(B) To keep the house cool in summer season
(C) To keep the house hot in summer season
(D) To keep the house cool in winter season

20. Which of the following is not a sense organ?

- (A) Ears (B) Eyes
(C) Nose (D) Heart

21. What should we use for covering short distances to reduce air pollution?



22. Which of the following statements is correct?

- (A) Old people need food that is hard and raw.
(B) Eating Junk food is good for health.

- (C) Cooking makes the vegetable soft and easy to chew.
- (D) Overcooking increases the nutritive value.

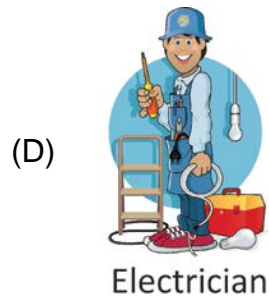

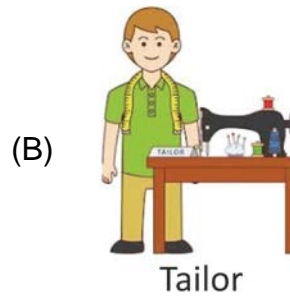

23. Look at the table given below.

Natural	Man-made
Air	Plastic
Soil	Soap
?	Nylon

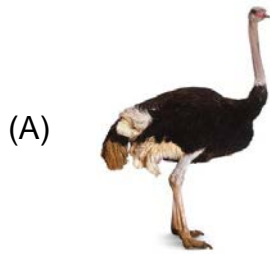
Which material correctly completes the table?

- (A) Rocks
- (B) Paper
- (C) Cement
- (D) Steel

24. The _____ treats the diseases of the patients.



25. Which of the following is not a farmer's friend?



26. By which process, water can be converted from liquid to gas?

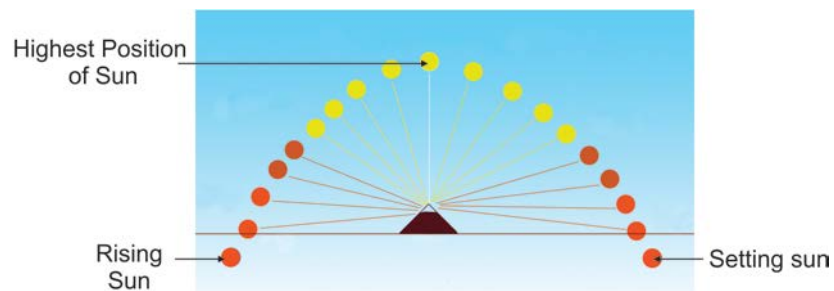
(A) Vaporization

(B) Melting

(C) Freezing

(D) Sublimation

27. What does rising Sun, highest position of Sun and setting Sun indicate?



(A) Noon, morning, evening

(B) Morning, evening, noon

(C) Morning, noon, evening

(D) Evening, morning, noon

Acknowledgement

Copyright in this booklet is owned by Orange Education Pvt Ltd, unless otherwise indicated. Every effort has been made to trace and acknowledge copyright. Orange Education Pvt Ltd apologises for any accidental infringement and welcome information to redress the situation.

For more information, please visit our website: www.orangeeducation.in



Website: www.orangeeducation.in

