



School Level Examination

SLE 2024

SET:

| |
|---|
| I |
|---|

GRADE
1

CYBER

Subject Code:

| | | |
|---|---|---|
| 5 | 0 | 1 |
|---|---|---|

Total Questions: 30

Total Marks: 30

Time: 1 hour

DO NOT OPEN THIS BOOKLET UNTIL INSTRUCTED TO DO SO

- All questions are compulsory.
- Read the instructions on the **ANSWER SHEET** and fill in your **NAME, CLASS** and **OTHER INFORMATION**.
- To mark your choice of answer, darken the circles in the **ANSWER SHEET**, use an **HB PENCIL** only.
- You **MUST** record your answers on the **ANSWER SHEET** only.
- There are **30 MULTIPLE CHOICE QUESTIONS**. Each question carries one mark. Use the information provided to choose the **BEST** possible answer among the four options. On your **ANSWER SHEET** darken the circle that matches your answer.
- Marks are **NOT** deducted for incorrect answers.
- Return the **ANSWER SHEET** to the invigilator at the end of the examination.
- You are **NOT** allowed to use a calculator. You may use a ruler and spare paper for rough work.

1

CYBER

This question paper contains a total of 30 questions divided into three sections - A, B and C.

Section A (Logical Reasoning)

1. If P buys a ticket for Q and R buys a ticket for S, then V will buy a ticket for _____.



- (A) T
(B) U
(C) S
(D) W
2. Identify the given figure.




- (A) Cylinder
(B) Sphere
(C) Cube
(D) Pyramid
3. Asha has 3 notes of different denominations. The total value of these notes is ₹17. What are the denominations of notes that she has?
- (A) ₹10, ₹4, ₹3
(B) ₹5, ₹5, ₹7
(C) ₹10, ₹5, ₹2
(D) ₹10, ₹5, ₹1
4. Which is the fifth letter from the right end in the given word?
- S U N F L O W E R S
- (A) O
(B) W
(C) F
(D) L
5. Which two letters will come next in the following pattern?
- Y Y Y Z Z Y Y Y Z Z Y Y Y Z Z Y _ _
- (A) X Z
(B) Y X
(C) Y Y
(D) Z Y

Section B (Subject Specific)

6. Doctors use computers to make _____ of the patients.
 (A) Bill (B) Report
 (C) Result (D) None of the Above
7. Statement 1 – Smart machines do not make mistakes.
 Statement 2 – Smart machines work very slowly.
 Identify the correct answer:
 (A) Both statements are true
 (B) Both statements are false
 (C) Statement 1 is true and statement 2 is false
 (D) Statement 1 is false and statement 2 is true
8. Who invented the mouse?
 (A) Douglas Engelbart
 (B) Charles Babbage
 (C) Wilbur Wright
 (D) None of the Above
9. I look like an TV and display what you type. Who Am I?
 (A) CPU (B) Monitor
 (C) Printer (D) Speaker
10. While watching a movie on a desktop computer the sound and video come from:
 (A) Sound – Speakers, Video – Keyboard
 (B) Sound – Monitor, Video – Scanner
 (C) Sound – Speakers, Video – Monitor
 (D) Sound – Mouse, Video – Printer
11. Which key is also known as the return key?
 (A) Backspace (B) Delete
 (C) Shift (D) Enter

12. Which of the following is a function key?



13. While typing a story, which of the following keys will help Rameshwar to capitalize a letter?

(A) Caps Lock

(B) Enter

(C) Space

(D) F5

14. We use the _____ finger to scroll the scroll wheel on mouse.

(A) Middle

(B) Index

(C) Ring

(D) Little

15. Identify the incorrect action of mouse.

(A) DRAGGING

(B) SCROLLING

(C) CLICKING

(D) TYPING

16. A computer mouse helps us to move the _____ from one place to another.

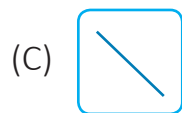
(A) MONITOR

(B) PRINTER




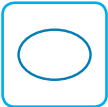
(C) KEY

(D) ICON

17. Which of the following cannot be used to draw shapes?



18. Choose the right match.

| | |
|--|----------------------------|
| 1.  | I. Erase your Drawing |
| 2.  | II. Fill Colour in a Shape |
| 3.  | III. Draw Curves |
| 4.  | IV. Draw Circles |

- (A) 1-I (B) 2-II
(C) 3-III (D) 4-IV

19. While designing a card for his mother, Sonu decided to make a drawing using curves (Freehand). Which tool should he use for it?

- (A) Pencil (B) Shape
(C) Fill (D) Eraser

20. What does foam effect do?

- (A) Adds the bubbles in the drawing
(B) Makes the drawing blur
(C) Adds shapes in the drawing
(D) Gives the dripping effect

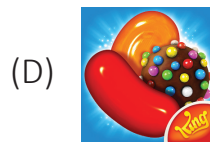
21. Which of the following is not a part of the Tux Paint window?

- (A) Toolbar (B) Drawing Canvas
(C) Selector Pane (D) Desktop

22. Which tool is used to open an existing file in Tux Paint?

- (A) OPEN (B) NEW
(C) PAINT (D) QUIT

23. Which of the following is NOT an app?



24. Match the following devices with their functions.

| | |
|---------------|--------------------|
| 1. Smartwatch | I. Watch videos |
| 2. Roomba | II. Keep food cold |
| 3. Smartphone | III. Clean floors |
| 4. Fridge | IV. Track Exercise |

(A) 1 – IV, 2 – III, 3 – I, 4 – II

(B) 1 – I, 2 – II, 3 – III, 4 – IV

(C) 1 – II, 2 – I, 3 – IV, 4 – III

(D) 1 – III, 2 – II, 3 – I, 4 – IV

25. On the basis of the given statements, identify the device.

1 – It is a small device that you can wear on the wrist.

2 – It tracks our Heart rate, steps, etc.

3 – It is a very small touchscreen device.

(A) It is a smartphone

(B) It is a smartwatch

(C) It is a mouse

(D) It is a laptop

Section C (Competency Enhancement)

26. We use our hands to touch and move items. In the same way, we use a _____ to move items on the computer screen.

(A) Keys

(B) Mouse

(C) Printer

(D) Speaker

27. Ramesh wants to type the following text in his drawing:

A B C 8 E F G 7 I J K L 9

He is unable to give space between the letters. Suggest him the key for the same.

(A) Enter

(B) Spacebar

(C) Tab

(D) Caps Lock

28. The correct steps to select the rectangle tool in the Paint program are:
- (A) Home tab – Shapes group – Rectangle tool
 - (B) Paint tab – Colours tool – Rectangle tool
 - (C) Home tab – Colours tool – Rectangle tool
 - (D) Colours tab – Home group – Rectangle tool
29. To write somebody's phone number on your laptop, which keys will you use?
- (A) Number Keys
 - (B) Alphabet Keys
 - (C) Function Keys
 - (D) Enter Key
30. To fill a closed shape in a drawing quickly with blue colour. Ana has made for her friend, which tool should she use?

