



School Level Examination

SLE 2024

SET:

I

GRADE
4

CYBER

Subject Code:

5	0	1
---	---	---

Total Questions: 30

Total Marks: 30

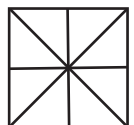
Time: 1 hour

DO NOT OPEN THIS BOOKLET UNTIL INSTRUCTED TO DO SO

- All questions are compulsory.
- Read the instructions on the **ANSWER SHEET** and fill in your **NAME, CLASS** and **OTHER INFORMATION**.
- To mark your choice of answer, darken the circles in the **ANSWER SHEET**, use an **HB PENCIL** only.
- You **MUST** record your answers on the **ANSWER SHEET** only.
- There are **30 MULTIPLE CHOICE QUESTIONS**. Each question carries one mark. Use the information provided to choose the **BEST** possible answer among the four options. On your **ANSWER SHEET** darken the circle that matches your answer.
- Marks are **NOT** deducted for incorrect answers.
- Return the **ANSWER SHEET** to the invigilator at the end of the examination.
- You are **NOT** allowed to use a calculator. You may use a ruler and spare paper for rough work.

This question paper contains a total of 30 questions divided into three sections - A, B and C.

Section A (Logical Reasoning)

- In a certain code, 3456 is coded as ROPE, 15526 is coded as APPLE, then how is 54613 coded?
 (A) RPPEO (B) ROPEA
 (C) POEAR (D) PAREO
 - If 'P' means '+', 'Q' means '-', 'R' means 'x', 'S' means '÷', then find the value of 50P40Q8R16S4.
 (A) 56 (B) 52
 (C) 68 (D) 58
 - The number of squares in the figure is _____.
 (A) 5 (B) 6
 (C) 4 (D) 7
- 
- Among the five children, Tanya, Raju, Hrithik, Janvi, and Tara, each having a different height. Tanya is taller than Janvi but shorter than Raju, and Hrithik is shorter than Tara but taller than Raju. Who among them is the second in increasing order of height?
 (A) Raju (B) Tanya
 (C) Tara (D) Hrithik
 - If $**** = 32$, then find the value of $*****$
 (A) 96 (B) 100
 (C) 104 (D) 108

Section B (Subject Specific)

- A group of _____ is called a nibble.
 (A) 4-bits (B) 8-bits
 (C) 2-bits (D) 1-byte
- Which pane of the Start menu contains the tiles of apps?
 (A) Left (B) Right
 (C) Center (D) None of these

8. Which of the following is the default view of a presentation?

- (A)  (B) 
- (C)  (D) 

9. Read the given statements and select the correct one.

- (i) When using Windows, you can only work on one application at a time.
- (ii) Microsoft Windows enables you to run more than one application at a time and to transfer information between applications.
- (iii) The user interface may be graphical with icons and textual with a command line.
- (A) (i) and (ii) (B) (i) and (iii)
- (C) Only (ii) (D) (ii) and (iii)

10. Find the INCORRECT match.

- (A) Plotter → Printing out road maps
- (B) Touchscreen → PDAs, smartphones
- (C) OMR → Capture data from marked answers
- (D) Magnetic Stripe Reader → Making backup copies of data

11. Which of the following is not a messaging app?

- (A)  (B) 
- (C)  (D) 

12. The address of a website known as _____ is entered in the _____ bar of the browser window.

- (A) URL, Address (B) Search, Link
(C) Browser, Address (D) Hypertext, Search

13. Except for _____, all of these are example of storage devices.

- (A) CD (B) DVD
(C) Keyboard (D) Hard disk

14. The steps to select the Insert/Overtyping mode are given below. Select the correct order.

- (i) Click Overtyping. The Insert/Overtyping button appears on the Status bar.
- (ii) If the Insert button appears on the Status bar, it means the Insert mode is selected. If you click the Insert button, it will change to Overtyping.

(iii) The Customize Status bar menu appears.

(iv) Right-click the Status bar.

(A) (i), (ii), (iii), (iv)

(B) (ii), (iv), (i), (iii)

(C) (iv), (iii), (i), (ii)

(D) (iv), (iii), (ii), (i)

15. Which of these sections a slide layout does NOT have?


(A) Lists

(B) Animations

(C) Titles

(D) Charts

16. Which of the following devices supports the swiping action?



17. The sequence of instruction is known as a Program. This program written for a computer is known as _____.

(A) Hardware

(B) Software

(C) Language

(D) None of these

18. A folder is also known as a _____.

(A) Group

(B) Collection

(C) Directory

(D) Program

19. Which of the following is a correct internet address?

(A) ww.yahoo.com

(B) www.cartoonnetwork.co

(C) www.hotmail.com

(D) www.indiatime.comm

20. Select the correct sequence to change the font of the text in Word.

(i) Choose the desired font.

(ii) Click on the drop-down arrow next to the Font box.

(iii) Click on the Home tab.

(iv) Select the text.

(A) (iii), (i), (iv), (ii)






(B) (ii), (iii), (iv), (i)

(C) (ii), (iii), (i), (iv)

(D) (iv), (iii), (ii), (i)

21. If you press the insert key and type a character, the existing character to the right of the cursor will be erased or overlapped. This is called _____.
- (A) Insertion mode (B) Erase mode
(C) Overwrite mode (D) Safe mode
22. _____ keys are also known as toggle keys.
- (A) Shift, Esc (B) Control key, Enter
(C) Caps Lock, Insert (D) Enter, Shift
23. It has the information that the computer can read. You can use the computer to read what is on it or put new information on it. Name the device.
- (A) Printout (B) UPS
(C) Network (D) Hard disk

24. Match the following:

Column I	Column II
(a) 	(i) Text Effect
(b) 	(ii) Underline
(c) 	(iii) Center Align
(d) 	(iv) Justify
(e) 	(v) Italics

- (A) (a) → (ii), (b) → (iv), (c) → (iii), (d) → (i), (e) → (v)
(B) (a) → (i), (b) → (v), (c) → (ii), (d) → (iii), (e) → (iv)
(C) (a) → (iii), (b) → (v), (c) → (iv), (d) → (ii), (e) → (i)
(D) (a) → (iv), (b) → (ii), (c) → (i), (d) → (v), (e) → (iii)
25. Which of these is INCORRECT statement about twitter?
- (A) Twitter was launched in the year 2006.
(B) Twitter is a social networking and microblogging site.
(C) Twitter was created by Mark Zuckerberg.

(D) Twitter was released by an American company Odeo.

Section C (Competency Enhancement)

26. Abhishek loves to play games. He has different devices but he has started playing console games. Suggest him a device that he can use to play console games.
- (A) Mouse (B) Joystick
(C) Keyboard (D) Webcam
27. William has to search about Environment on the Internet. He knows the steps to do so, but doesn't know the correct sequence. Help him by selecting the correct order of the steps.
- (i) Type "Environment" in the Address bar.
(ii) Click on the Enter button.
(iii) Open a web browser.
- (A) (i), (iii), (ii) (B) (ii), (iii), (i)
(C) (iii), (i), (ii) (D) (i), (ii), (iii)
28. Sunita wants to buy a scanner that allows multiple papers to be scanned at a time. Help her to decide which scanner she should buy.
- (A) Flatbed scanner (B) Sheetfed Scanner
(C) Hand held Scanner (D) Image Scanner
29. Yugansh has recently bought a new computer which runs on the Windows 10 Operating System. He wants to create a new desktop but he is not sure about correct button or option. Help him to do this.
- (A) Task View button, New Desktop option
(B) Start button, Task menu option
(C) Browse button, Open option
(D) None of these
30. Tanvi has created a project in MS PowerPoint. Her teacher asked her to make all the headings bold and underlined. Which of the following steps should she follow to do so?
- (A) Keep pressing the Ctrl key & select headings & Ctrl + B & Ctrl + U
(B) Ctrl + A & Ctrl + X & Ctrl + V

- (C) Keep pressing the Ctrl key & select headings & Ctrl + V & Ctrl + U
- (D) Ctrl + B & Ctrl + A & Ctrl + U

