



School Level Examination
SLE 2024

SET:

I

GRADE
6

CYBER

Subject Code:

5	0	1
---	---	---

Total Questions: 40

Total Marks: 40

Time: 1 hour

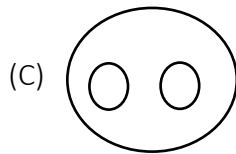
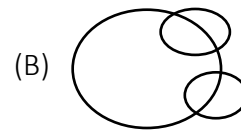
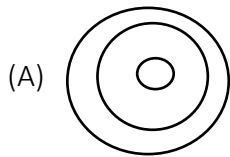
DO NOT OPEN THIS BOOKLET UNTIL INSTRUCTED TO DO SO

- All questions are compulsory.
- Read the instructions on the **ANSWER SHEET** and fill in your **NAME, CLASS** and **OTHER INFORMATION**.
- To mark your choice of answer, darken the circles in the **ANSWER SHEET**, use a **BLUE/BLACK BALL-POINT PEN** only.
- You **MUST** record your answers on the **ANSWER SHEET** only.
- There are **40 MULTIPLE CHOICE QUESTIONS**. Each question carries one mark. Use the information provided to choose the **BEST** possible answer among the four options. On your **ANSWER SHEET** darken the circle that matches your answer.
- Marks are **NOT** deducted for incorrect answers.
- Return the **ANSWER SHEET** to the invigilator at the end of the examination.
- You are **NOT** allowed to use a calculator. You may use a ruler and spare paper for rough work.

This question paper contains a total of 40 questions divided into three sections - A, B and C. Read the instructions carefully before attempting these questions.



Section A (Logical Reasoning)

- A and B are sisters, C and D are brothers and C is the father of B. How D is related to A?
(A) Niece (B) Father
(C) Uncle (D) Brother
- Select the term from the option which will continue the given series.
LE, MF, OG, RH,?
(A) VJ (B) UI
(C) WJ (D) VI
- Which one of the following Venn diagrams represents the best relationship between Snake, Lizard, Reptiles?



(D) None of these

- Find the mirror images of the given picture.



- Ram is facing East. He turned 135° in a clockwise direction and then 180° in an anti-clockwise direction. Which direction he is facing now?
(A) East (B) North
(C) North-East (D) South-West

6. Choose the best alternative.

CAT : DDY :: BIG : ____

(A) CLM

(B) CLL

(C) CML

(D) CEP

7. Complete the sequence.

1, 1, 2, 3, 5, 8, 13, ____

(A) 15

(B) 17

(C) 19

(D) 21

8. Devices that allow you to put information into the computer are known as _____ devices.

(A) Input

(B) Output

(C) Reading

(D) Speaking

Section B (Subject Specific)

9. An external output device that takes data from a computer and generates output in the form of graphics or text on a paper is known as a _____.

(A)



(B)



(C)



(D)



10. Which of these is used for giving input to the computer?

(A)




(B)



(C)



(D)



11. Which of the following is a function of an operating system?

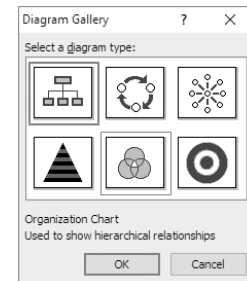
(A) Creating spreadsheets

(B) Managing files and folders

(C) Editing images

(D) Playing music

12. DOS is an example of _____.
 (A) Android (B) CUI
 (C) MacOS (D) GUI
13. What is the significance of 'Motion' block in scratch programming?
 (A) To change the costume. (B) To control the movement of the sprite.
 (C) To change the colour of the sprite. (D) To delete the sprite.
14. What does FAT stands for?
 (A) File allocation table (B) File allotment table
 (C) Full allocation toy (D) Final allocation table
15. Entries on the plotted area of a chart or graph, which are linked to the data table of the chart or graph is known as _____.
 (A) Chart Area (B) Graph Area
 (C) Axis (D) Legend
16. What does the image depict in MS - Word?
 (A) Charts
 (B) Shapes
 (C) SmartArt
 (D) WordArt
17. To delete large text, _____ it and press _____ key.
 (A) select, tab (B) select, F5
 (C) select, delete (D) select, shift
18. 's' in https stands for _____.
 (A) Spamming (B) Secure
 (C) Split (D) Sensory
19. When one slide follows another slide on the screen, it is called _____.
 (A) Slide Show (B) Transition
 (C) Animation (D) Presentation
20. The types of Slide transitions are:
 (A) Subtle (B) Exciting
 (C) Dynamic Content (D) All of these
21. You want to combine two or more relational operators to produce a single true/false result. Which operators will you choose?
 (A) Arithmetic Operators (B) Logical operators
 (C) Relational Operators (D) All of these



22. What will be the coordinates of the sprite when it is at its default position on the stage?
 (A) $X = 0, Y = 180$ (B) $X = 0, Y = 0$
 (C) $X = 180, Y = 0$ (D) $X = -180, Y = 0$
23. All the junk mails are stored in _____.
 (A) Spam (B) Inbox
 (C) Sent (D) Trash
24. Where will you find your incoming mails after signing in?
 (A) Mail box (B) Drafts
 (C) Inbox (D) Outbox
25. Which of the following is not found in Google Apps tray?
 (A) Slides (B) Facebook
 (C) YouTube (D) None of these
26. Which of the following is an example of Artificial intelligence?
 (A) MS Excel (B) MS Word
 (C) Alexa (D) None of these
27. Which of the following is the correct term used for combining two or more rows or columns?
 (A) Joining (B) Adding
 (C) Merging (D) Splitting
28. In Excel which option denote the range from B1 through E9?
 (A) B1:E9 (B) B1toE9
 (C) B1-E9 (D) B1\$E9

Instruction: Q. 29 to 33 are two-key based questions having four options A, B, C and D out of which TWO are correct.

29. The various ways of interacting with computers are:
 (A) Through mouse only. (B) Through keyboard only.
 (C) CUI (Character User Interface) (D) GUI (Graphical User Interface)
30. The shortcut key to delete the current slide in PowerPoint is _____.
 (A) Delete Key (B) Spacebar key
 (C) Backspace key (D) Insert key
31. While applying conditional formatting, we can check the conditions against _____.
 (A) Formula (B) Values
 (C) Series (D) None of these

32. iCloud provide free storage of _____ GB and Google drive provide free storage of _____ GB.
- (A) 10 (B) 5
(C) 15 (D) 20
33. Artificial intelligence can be defined as _____.
- (A) Ability to learn and make decisions.
(B) Programming with your own intelligence.
(C) Upgrading memory of computer.
(D) An ability to store previous data and predictions.

Section C (Competency Enhancement)

34. Raghav went to visit his uncle in CCU as he was admitted due to critical heart condition. He was surprised to see the machine which was continuously measuring various vital statistics of a patient. He was being told by his cousin that it is a type of computer, which is measuring the vital statistics and displaying it in digital form. Name the device out of given option(s).
- (A) Hybrid computer (B) Analog computer
(C) Digital computer (D) Calculator
35. Sameera wants to check the spellings in her word document. Tell her what is the shortcut key for Spelling Check in document.
- (A) F7 (B) Shift + F7
(C) Ctrl + F7 (D) Alt + F7
36. Which of the following is the feature that would convert the given Table-1 into Table-2?

Table-1

Roll No.	Name	Marks
1	Ayan M	45
2	Aarush M	46
3	Kaashvi S	50

Table-2

Roll No	Name	Marks
1	Ayan M	45
2	Aarush M	46
3	Kaashvi S	50

- (A) Table To Text (B) Convert To Text
(C) Text to Convert (D) Text to Table
37. Where will Asha write in order to create and upload audio files on a website?
- (A) Notebook (B) Laptop
(C) Podcast (D) Whatsapp

38. Rita has created a presentation of 10 slides. The teacher has asked her to display all the slides in single screen. Help her in selecting the appropriate view.
- (A) Normal (B) Slide Sorter View
(C) Outline view (D) None of these
39. Shriya is putting files from her computer on facebook but she has forgotten what is the term used for putting files to the server from computer. Please help her.
- (A) Transferring (B) Trashing
(C) download (D) Uploading
40. Ajay wants to use his audio file in movie maker. What type of file should he save his audio as to be able to import it correctly into movie maker?
- (A) .jpg (B) .mov
(C) .wav (D) .aud



coding



click



Presentation



web
@

