

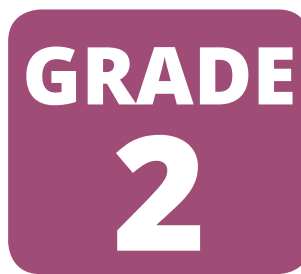


School Level Examination

SLE 2024

SET:

I



SCIENCE

Subject Code:

3	0	1
---	---	---

Total Questions: 30

Total Marks: 30

Time: 1 hour

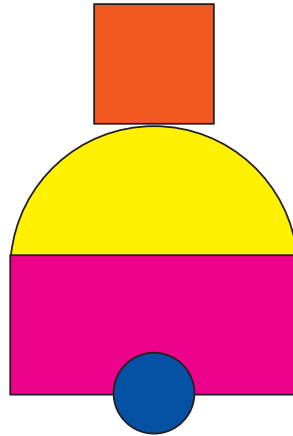
DO NOT OPEN THIS BOOKLET UNTIL INSTRUCTED TO DO SO





- All questions are compulsory.
- Read the instructions on the **ANSWER SHEET** and fill in your **NAME, CLASS** and **OTHER INFORMATION**.
- To mark your choice of answer, darken the circles in the **ANSWER SHEET**, use an **HB PENCIL** only.
- You **MUST** record your answers on the **ANSWER SHEET** only.
- There are **30 MULTIPLE CHOICE QUESTIONS**. Each question carries one mark. Use the information provided to choose the **BEST** possible answer among the four options. On your **ANSWER SHEET** darken the circle that matches your answer.
- Marks are **NOT** deducted for incorrect answers.
- Return the **ANSWER SHEET** to the invigilator at the end of the examination.
- You are **NOT** allowed to use a calculator. You may use a ruler and spare paper for rough work.

This question paper contains a total of 30 questions divided into three sections—A, B and C.

Section A (Logical Reasoning)

1. Which of the following shapes is missing in the given figure?



- (A) Circle (B) Rectangle
(C) Semi-circle (D) Triangle
2. If today is Saturday, then the day after tomorrow will be _____.
(A) Friday (B) Thursday
(C) Monday (D) Tuesday
3. Which of the following figures has the most number of corners?
(A)  (B) 
(C)  (D) 
4. There are _____ more stars than moons.



- (A) 0 (B) 1
(C) 2 (D) 3
5. Sohan bought a crate of eggs out of which half of them were broken. If the crate had 28 eggs, how many are still in a good shape?
(A) 13 (B) 14
(C) 20 (D) 15

Section B (Subject Specific)

6. Sheetal's mother and father both are working. They have a maid who looks after Sheetal till her parents come home in the evening. Sheetal's grandparents live in Punjab. What type of family does Sheetal have?

- (A) Joint family (B) Nuclear family
(C) Big family (D) All of these

7. In which of the following types of transports, human power is used?



8. While going to school, Rishi wears a tie in a body part which is called _____.

- (A) Shoulder (B) Forehead
(C) Neck (D) Hand

9. Look at the given pictures. Identify the category of food they belong to.



Pizza



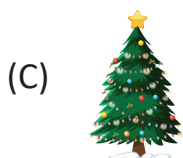
Samosa








Cold drink

- (A) Healthy food (B) Junk food
(C) Protective food (D) None of these

10. Pick the odd one out.



11. Match the column I with column II and select the correct option.

Column I (Body parts)	Column II (Functions)
p. 	(i) Helps to see
q. 	(ii) Helps to smell
r. 	(iii) Helps to hear
s. 	(iv) Helps to walk
t. 	(v) Helps to hold things

(A) p- (iv), q- (v), r-(i), s-(iii), t-(ii)

(B) p- (ii), q- (v), r-(i), s-(iii), t-(iv)

(C) p- (i), q- (v), r-(ii), s-(iii), t-(iv)

(D) p- (v), q- (ii), r-(iv), s-(iii), t-(i)

12. Which non-living things do you see in your school?

(A) Friends

(B) Plants

(C) Table-chair

(D) Teachers

13. Observe the given figure and select the name of child who has identified the plant parts P-T correctly.


Ram	P-Seed	Q-Leaf	R-Flower	S-Root	T-Stem
Seema	P-Flower	Q- Fruit	R-Leaf	S-Stem	T-Root
Rahul	P- Fruit	Q- Flower	R-Leaf	S-Stem	T-Root
Sunita	P-Leaf	Q-Root	R-Flower	S-Stem	T-Fruit

(A) Ram

(B) Seema

(C) Rahul

(D) Sunita



14. Which of the following articles should NOT be touched with wet hands?

(A) 

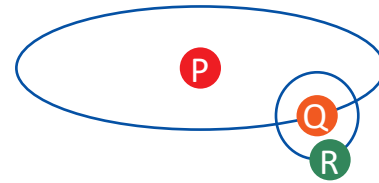
(B) 

(C) 

(D) 

15. Study the given diagram and select the correct option.

- (A) P is Sun and it rotates around the Earth.
- (B) Q is Earth and it rotates around the Moon.
- (C) R is Moon and it rotates around the Sun.
- (D) Q is Earth and it revolves around the Sun.

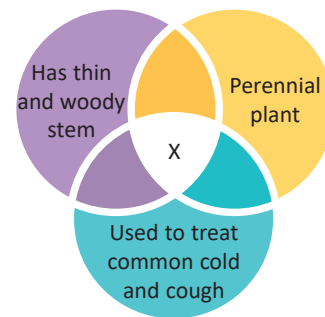


16. Which of the following is the most important function of nose besides smelling?

- (A) Breathing
- (B) Digestion
- (C) Excretion
- (D) Locomotion

17. Which of the following can replace 'X' in the given Venn diagram?

- (A) Pea
- (B) Coriander
- (C) *Tulsi*
- (D) Rose




18. Observe the given figure.



Which of the following festivals is celebrated in the above given season?

- (A) Holi
- (B) Christmas
- (C) Rakshabandhan
- (D) Diwali

19. Which of the following is CORRECT example of air transport?

- (A) 
- (B) 
- (C) 
- (D) All of these

20. You have gone on an adventure trip. The house you will make for yourself is _____.



21. What should we do if we ride the school bus?

(A) Keep on talking with bus driver.

(B) Do not talk with bus driver.

(C) Make lot of noise.

(D) Ask driver to play loud music.

22. Read the given statements and select the correct option.

Statement 1: Non-living things are either natural or man-made.

Statement 2: Toys, furniture, paper, etc., are man-made things.

(A) Both statements 1 and 2 are correct.

(B) Both statements 1 and 2 are incorrect.

(C) Statement 1 is correct but statement 2 is incorrect.

(D) Statement 1 is incorrect but statement 2 is correct.

23. We eat different parts of plants. Select the option in which the name of plant is correctly matched with its edible part.

(A) Spinach- Stem

(B) Cauliflower- Root

(C) Sugarcane- Flower

(D) Cabbage- Leaf

24. Select the option in which animal is NOT correctly matched to its habitat.

(A) Elephant- Forest

(B) Camel- Desert

(C) Squirrel - Tree

(D) Dolphin- Polar regions

25. Fan moves when we switch it ON. Select the correct reason for its being a living or non-living thing.

(A) It is a living thing because it can move.



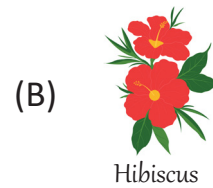
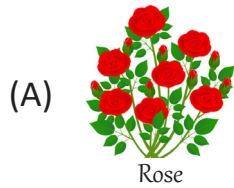
(B) It is a non-living thing because it cannot move on its own.

(C) It is a non-living thing because it can move.

(D) It is a living thing because it cannot move on its own.

Section C (Competency Enhancement)

26. Ravi collected four pictures of shrubs but he chose one wrong picture. Which of the following pictures chosen by Ravi is incorrect?

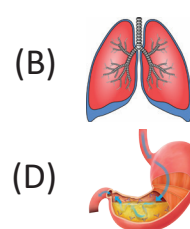
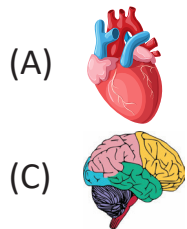


27. Select the option in which Do's and Don'ts are mentioned correctly.

	Do's	Don'ts
(i)	Respect your elders	Eat healthy food
(ii)	Follow the traffic rules	Play on roadside
(iii)	Take bath everyday	Wear seat belt
(iv)	Play with fire	Play with nail cutter

- (A) (i) (B) (ii)
(C) (iii) (D) (iv)
28. Rohan was asked to write any four safety rules to be followed in his school. He wrote the following rules. Which of the following safety rules is correct?
- (A) Never run in the corridor. (B) Do not jump on desks and chairs.
(C) Do not run up or down the stairs. (D) All of these

29. Select the body part that helps us to think and work.



30. _____ is the name of the baby of the animal shown here.

- (A) Calf (B) Lamb
(C) Foal (D) Puppy



