



SCIENCE

Grade 2

National Level Examination
NLE 2025

Subject Code:

3	0	1
---	---	---

Total Questions: 30

Total Marks: 30

Time: 1 hour

DO NOT OPEN THIS BOOKLET UNTIL INSTRUCTED TO DO SO

- All questions are compulsory.
- Read the instructions on the **ANSWER SHEET** and fill in your **NAME, CLASS** and **OTHER INFORMATION**.
- To mark your choice of answer, darken the circles in the **ANSWER SHEET**, use an **HB PENCIL** only.
- You **MUST** record your answers on the **ANSWER SHEET** only.
- There are **30 MULTIPLE CHOICE QUESTIONS**. Each question carries one mark. Use the information provided to choose the **BEST** possible answer among the four options. On your **ANSWER SHEET** darken the circle that matches your answer.
- **$\frac{1}{2}$ MARK** will be deducted for every **WRONG ANSWER**.
- Return the **ANSWER SHEET** to the invigilator at the end of the examination.
- You are **NOT** allowed to use a calculator. You may use a ruler and spare paper for rough work.



This question paper contains a total of 30 questions divided into three sections—A, B and C. Read the instructions carefully before attempting these questions.

Section A (Logical Reasoning)

1. Raghav has two 100-rupee notes, one 50-rupee note, one 10-rupee coin, and one 2-rupee coin. Find the total money that Raghav has.

(A) ₹ 250 (B) ₹ 253
(C) ₹ 262 (D) ₹ 252

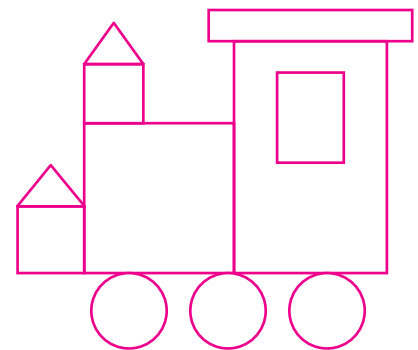
2. Complete the given pattern.

MONDAY, WEDNESDAY, _____, SUNDAY.

(A) THURSDAY (B) FRIDAY
(C) SATURDAY (D) TUESDAY

3. How many times is each shape used in the given figure?

	Triangle	Square	Circle	Rectangle
(A)	3	1	3	2
(B)	2	3	3	2
(C)	3	2	3	4
(D)	2	3	3	3



4. Arrange the letters of the alphabet given below to make a meaningful word and identify the category of the word.

F U N W E R S O L

(A) Flower (B) Fruit
(C) Vegetable (D) Nutrient


5. Complete the given pattern.







(A)  (B) 
(C)  (D) 

Section B (Subject Specific)

6. Which of the given activities is done with the help of legs?



7. Match the Column I with Column II and select the correct option.

Column I (Pictures)	Column II (Festivals)
(p) 	(i) Holi
(q) 	(ii) Diwali
(r) 	(iii) Raksha Bandhan
(s) 	(iv) Dussehra

(A) (p)–(i), (q)–(ii), (r)–(iii), (s)–(iv)

(B) (p)–(iii), (q)–(i), (r)–(iv), (s)–(ii)

(C) (p)–(ii), (q)–(iii), (r)–(iv), (s)–(i)

(D) (p)–(i), (q)–(ii), (r)–(iv), (s)–(iii)

8. Guava has _____.

(A) One seed

(B) Two seeds

(C) Three seeds

(D) Many seeds



9. Identify the correctly labelled diagram.



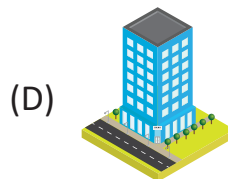
Houseboat



Tent



Caravan



Hut

10. Pick the odd one in each group (i to iii) and select the correct set.

(i) Bike, Bus, Car, Ship

(ii) Telephone, Mobile phone, Newspaper, Television

(iii) Bicycle, Auto-rickshaw, Scooter, Aeroplane

(A) Bike, Newspaper, Bicycle (B) Ship, Newspaper, Aeroplane

(C) Bus, Telephone, Scooter (D) Car, Television, Auto-rickshaw

11. Identify the given type of plant and select the CORRECT statement(s) about this type of plant.


(i) This type of plant is medium-sized.

(ii) They have woody stems.

(iii) Another example of this type of plant is mint.

(A) (i) and (iii) only (B) (iii) only

(C) (ii) and (iii) only (D) (i) and (ii) only



12. Read the following statements regarding safety rules and select the INCORRECT statement.

(A) Always walk on the road.

(B) Do not run into the streets.

(C) Cross the road at the zebra crossing.

(D) Never play on the road.


13. Which festival is celebrated in remembrance of the birth of Jesus Christ?

(A) Christmas

(B) Diwali

(C) Holi

(D) Gurburab





14. Which of the following ways of maintaining personal hygiene is INCORRECT?

- (A) Clean your nails with a pin.
- (B) Rinse your mouth after every meal.
- (C) Cover your mouth when you cough.
- (D) Clean your ears with a cotton bud.

15. Which of the following protects the brain?

- (A) Heart
- (B) Skull
- (C) Ribs
- (D) Skeleton

16. A remote car is non-living because _____.

- (i) It does not grow
- (ii) It moves only with the help of a remote
- (iii) It never dies
- (iv) It does not need air



- (A) (i) and (ii) only
- (B) (i), (ii), (iii) and (iv)
- (C) (i), (ii) and (iii) only
- (D) (ii), (iii) and (iv) only

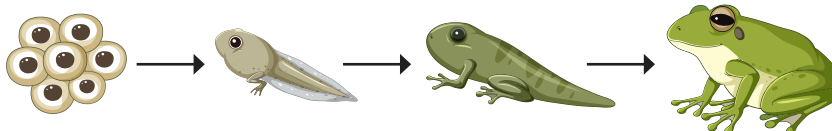
17. In the kitchen, sarees other than cotton should not be worn because _____.

- (A) These are expensive
- (B) They do not catch fire
- (C) They catch fire easily, stick to the body and cause serious burns
- (D) None of these

18. What is your relationship with the father of your mother?

- (A) Paternal grandfather
- (B) Maternal grandfather
- (C) Paternal great-grandfather
- (D) Maternal great-grandfather

19. The given diagram shows that living things _____.



- (A) Grow
- (B) Move
- (C) Breathe
- (D) Respire





20. Which of the following sense organs helps us in tasting sweets?



21. Observe the different shapes of the Moon.



What are these shapes called?

(A) Seasons

(B) Stars

(C) Circles

(D) Phases

22. Food _____.

(i) Gives us energy

(ii) Helps us to grow

(iii) Causes illness

(iv) Protects us from diseases

(A) (i) and (ii) only

(B) (ii) and (iii) only

(C) (i), (ii) and (iv) only

(D) (i), (ii) and (iii) only

23. A wind vane is fixed at the airport. It helps to find _____.

(A) Speed of air

(B) Presence of air

(C) Direction of air

(D) Pollution of air



24. Identify the group of animals that eat grass.

(A) Lion, leopard, tiger

(B) Rhinoceros, cow, goat

(C) Horse, sheep, dog

(D) Cat, mouse, rabbit

25. Read the given statements and select the correct option.

Statement 1: Trees have strong woody stems called trunks.

Statement 2: Trunks help trees stand straight and upright.

(A) Both statements 1 and 2 are correct.

(B) Both statements 1 and 2 are incorrect.

(C) Statement 1 is correct but statement 2 is incorrect.

(D) Statement 1 is incorrect but statement 2 is correct.



Section C (Competency Enhancement)

DIRECTION (Q. 26 and 27): Refer to the given word grid containing different types of plants and answer the following questions.

B	S	N	O	K	A	Q	Y
U	P	N	N	U	U	V	U
M	I	N	T	I	K	N	I
T	N	B	L	E	M	O	N
R	A	M	O	K	K	R	O
O	C	L	M	A	N	G	O
S	H	U	N	E	E	M	P
E	K	N	K	O	R	R	L

26. How many names of trees are hidden in the word grid?
- (A) 3 (B) 2
(C) 1 (D) 4
27. How many names of herbs and shrubs are hidden in the word grid respectively?
- (A) 2, 2 (B) 2, 4
(C) 1, 2 (D) 4, 5

28. What could be 'X' and 'Y' in the given table?

- (A) X-Soil, Y-Water
(B) X-Earthworm, Y-River
(C) X-River, Y-Stone
(D) X-Water, Y-Earthworm

Living things	Non-living things
X	Book
Baby	Y
Honeybee	Sky

29. The seasons are caused by _____.
- (A) The rotation of Earth around its axis
(B) The revolution of Earth around Sun
(C) The revolution of Moon around Earth
(D) Change in temperature

30. Consider the pictures 'P' and 'Q' and select the CORRECT statements.

- (A) P is a nuclear family while Q is the joint family.
(B) In the picture P, the man with a tie is the father.
(C) In the picture Q, the woman with spectacles and white hair is the youngest member.
(D) Both (A) and (B)



P



Q

