



# SCIENCE

## Grade 3

National Level Examination  
NLE 2025

Subject Code: 

3	0	1
---	---	---

Total Questions: 30

Total Marks: 30

Time: 1 hour

### DO NOT OPEN THIS BOOKLET UNTIL INSTRUCTED TO DO SO

- All questions are compulsory.
- Read the instructions on the **ANSWER SHEET** and fill in your **NAME, CLASS** and **OTHER INFORMATION**.
- To mark your choice of answer, darken the circles in the **ANSWER SHEET**, use an **HB PENCIL** only.
- You **MUST** record your answers on the **ANSWER SHEET** only.
- There are **30 MULTIPLE CHOICE QUESTIONS**. Each question carries one mark. Use the information provided to choose the **BEST** possible answer among the four options. On your **ANSWER SHEET** darken the circle that matches your answer.
- **$\frac{1}{2}$  MARK** will be deducted for every **WRONG ANSWER**.
- Return the **ANSWER SHEET** to the invigilator at the end of the examination.
- You are **NOT** allowed to use a calculator. You may use a ruler and spare paper for rough work.



This question paper contains a total of 30 questions divided into three sections—A, B and C. Read the instructions carefully before attempting these questions.

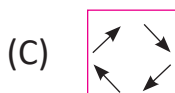
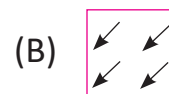
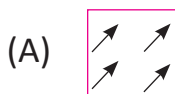
### Section A (Logical Reasoning)

- Simmi had 36 balloons. At a birthday party, 9 balloons burst. How many are left with her?  
(A) 26 (B) 29  
(C) 20 (D) 27
- Which of the following words CANNOT be formed with the help of the letters of a word 'EXPERIENCE'?  
(A) NICE (B) PRICE  
(C) EXERCISE (D) RICE
- The given table shows number of pages of the novel that Reena read during 5 days.

Day	Sunday	Monday	Tuesday	Wednesday	Thursday
No. of pages	31	21	19	23	34

How many more pages did Reena read on Thursday as compared to Monday?

- (A) 10 (B) 12  
(C) 13 (D) 20
- Complete the given pattern.  
ABC, BCD, CDE, \_\_\_\_\_.  
(A) FGH (B) GHI  
(C) IJK (D) DEF
  - Identify the correct figure in the sequence.



Section B (Subject Specific)

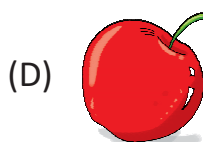
6. Which of the following birds cannot fly at all?
- (A) Ostrich (B) Kiwi  
(C) Eagle (D) Both (A) and (B)
7. Observe the given picture and identify the process.



- (A) Respiration (B) Digestion  
(C) Excretion (D) Germination
8. Read the given statements and select the correct option.
- Statement 1:** Roots grow below the ground.  
**Statement 2:** Roots hold the plant in the soil.
- (A) Both statements 1 and 2 are correct.  
(B) Both statements 1 and 2 are incorrect.  
(C) Statement 1 is correct but statement 2 is incorrect.  
(D) Statement 1 is incorrect but statement 2 is correct.
9. Fill in the blanks by selecting a correct option.

A body is said to be in uniform motion if it covers \_\_\_\_\_ distances in \_\_\_\_\_ intervals of time.

- (A) Equal, Equal (B) Unequal, Equal  
(C) Unequal, Unequal (D) Equal, Unequal
10. Which of the given fruits contains only one seed in it?






11. Which of the following are the first members of the food chain?  
 (A) Producers (B) Herbivores  
 (C) Carnivores (D) Decomposers
12. Rekha is feeling weak and hungry. She wants to eat some food to get strength. Which of the following food items is the best option to keep her healthy?



13. Match the Column I with Column II and select the correct option.

Column I	Column II
1. Luminous object	(p) Chair
2. Non-luminous object	(q) Sun
3. Pleasant sound	(r) Honking
4. Unpleasant sound	(s) Chirping of birds


- (A) 1-q, 2-r, 3-p, 4-s (B) 1-q, 2-p, 3-s, 4-r  
 (C) 1-r, 2-q, 3-p, 4-s (D) 1-p, 2-q, 3-s, 4-r
14. Identify the organ from the given clues.  
 (i) Bean-shaped (ii) Excretes wastes (iii) Purifies blood  
 (A) Heart (B) Lung  
 (C) Kidney (D) Liver
15. Which of the following options shows the person who stitches our clothes?



16. Mother was cooking noodles last night. The water got so hot that steam floated up from the pan. Steam is an example of \_\_\_\_\_.

- (A) Gas (B) Food  
(C) Solid (D) Liquid

17. The given figure shows the change in state of water. Identify X, Y and Z respectively.



- (A) Water, Ice, Steam (B) Ice, Steam, Water  
(C) Steam, Ice, Water (D) Steam, Water, Ice

18. Which of the given options represents the next phase of the Moon?



- (A)  (B)   
(C)  (D) 

19. Which of the following has fixed volume and fixed shape?

- (A) Steam coming from the kettle (B) Ice cube in refrigerator  
(C) Water in the sea (D) Both (A) and (C)

20. Select the INCORRECT statement from the following.

- (A) Camel eats leaves of plants.  
(B) Birds have different eating habits.  
(C) Butterflies suck nectar from different flowers.  
(D) All animals eat grass.

21. Which means of transport will you use to reach USA from India?

- (A) Train (B) Bus  
(C) Car (D) Aeroplane




22. Which of the following is the best non-polluting mode of transport for short distances?



23. Why do houses have sloping roofs?

- (A) To absorb more heat
- (B) To look beautiful
- (C) To help rainwater slip off easily
- (D) All of these



24. Identify the bird given below.



- (A) Swan
- (B) Kiwi
- (C) Penguin
- (D) Vulture

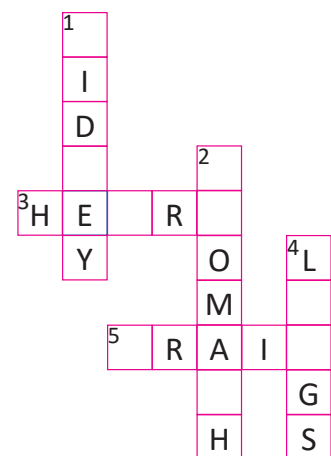
25. In winter, we should consume citrus fruits to a greater extent because they \_\_\_\_\_.

- (A) Are rich in vitamin C
- (B) Protect us from diseases
- (C) Maintain water content in our body
- (D) All of these

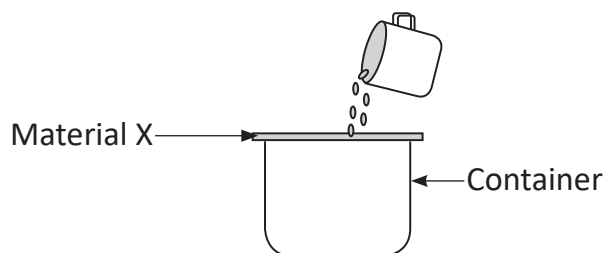
### Section C (Competency Enhancement)

26. Complete the given crossword by choosing the correct option.

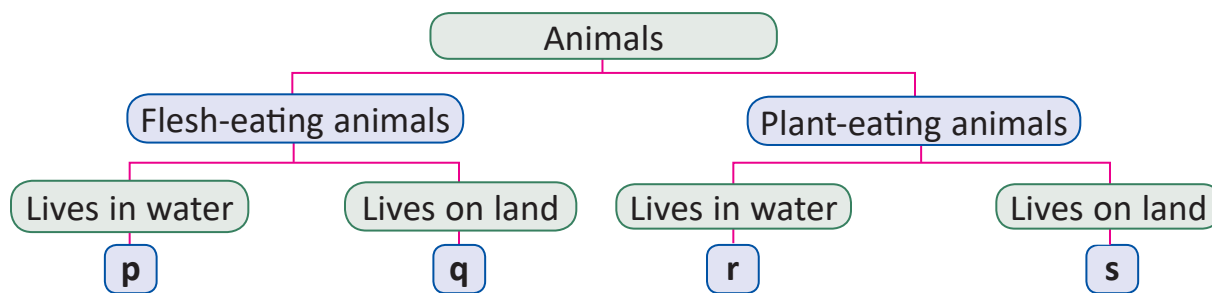
- (A) (1-K, N); (2-S, T, C); (3-A, T); (4-U, N); (5- B, N)
- (B) (1-K, M); (2-T, S, C); (3- E, T); (4- A, N); (5- B, E)
- (C) (1-K, R); (2-R, D, O); (3-R, E); (4-R, N); (5- O, R)
- (D) (1-K, D); (2-C, R, T); (3-X, R); (4-A, R); (5- B, R)



27. Nidhi wanted to find out if material 'X' would allow water to pass through. She put the material 'X' over a container and poured water onto it as shown in the given diagram. She found that no water was collected in the container. What material could 'X' be?



- (A) Porous cloth (B) Tissue paper  
(C) Glass (D) Sponge
28. Consider the given classification flowchart. Where should (X) tiger and (Y) zebra be placed?



- (A) (X)- q, (Y)- r (B) (X)- p, (Y)- s  
(C) (X)- p, (Y)- r (D) (X)- q, (Y)- s
29. Identify the animal by reading the given paragraph.  
A bear looking at his friend says to him, "The special pouch on your stomach is a wonderful thing. This bag helps you to keep your baby with you till it is fully grown up." The bear's friend is a \_\_\_\_\_.
- (A) Monkey (B) Panda bear  
(C) Giraffe (D) Kangaroo
30. Which of the following are means of mass communication?

(p) Internet, (q) Radio, (r) Newspaper  
(s) Telephone, (t) Postcard, (u) Television

- (A) p, q, r and u (B) p, r, s and t  
(C) s and t (D) q, r and t

