



National Level Examination
NLE 2025

Cyber Grade 1

Subject Code:

5	0	1
---	---	---

Total Questions: 30

Total Marks: 30

Time: 1 hour

DO NOT OPEN THIS BOOKLET UNTIL INSTRUCTED TO DO SO

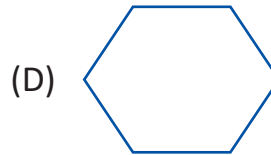
- All questions are compulsory.
- Read the instructions on the **ANSWER SHEET** and fill in your **NAME, CLASS** and **OTHER INFORMATION**.
- To mark your choice of answer by darkening the circles in the **ANSWER SHEET**, use an **HB PENCIL** only.
- You **MUST** record your answers on the **ANSWER SHEET** only.
- There are **30 MULTIPLE CHOICE QUESTIONS**. Use the information provided to choose the **BEST** possible answer among the four options. On your **ANSWER SHEET** fill in the circle that matches your answer.
- $\frac{1}{2}$ **MARK** will be deducted for every **WRONG ANSWER**.
- Return the **ANSWER SHEET** to the invigilator at the end of the examination.
- You are **NOT** allowed to use a calculator. You may use a ruler and spare paper for rough work.



This question paper contains a total of 30 questions divided into three sections—A, B and C. Read the instructions carefully before attempting these questions.

Section A (Logical Reasoning)

1. Identify the shape that has 5 sides.



2. What is the name of the given object that uses sand to show the passing of time?




(A) Sand clock

(B) Mirror clock

(C) Wall clock

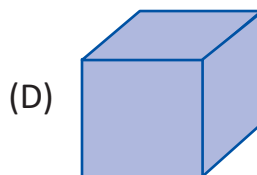
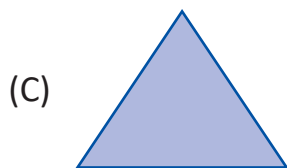
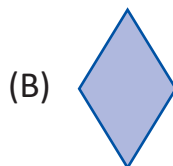
(D) Alarm clock

3. Identify the odd one out.





4. Which of the following is the 3D shape?



5. If you have 7 water bottles and 3 of them are empty, how many filled bottles do you have?

(A) 6

(B) 4

(C) 8

(D) 5

Section B (Subject Specific)

6. The Enter key is also called _____ key.

(A) Return key

(B) Entire key

(C) Command key

(D) Navigation key

7. What is Paint?

(A) A game

(B) A program

(C) An operating system

(D) Hardware

8. A machine is a _____.

(A) Living thing

(B) Thing made by humans to help us

(C) Type of animal

(D) Kind of tree

9. What is the name of the technology used to make robots work smartly?

(A) Real Intelligence

(B) Artificial Intelligence

(C) Practice

(D) Cloud

10. A computer needs _____ to run.

(A) Electricity

(B) Water

(C) Food

(D) Fuel



11. What does the Colors Group in Paint show?

(A) Different shapes	(B) Colours you can use
(C) Saved drawings	(D) Tools for drawing
12. The Tux penguin gives suggestions in the _____.

(A) Help Area	(B) Toolbar
(C) Drawing Canvas	(D) Colors Palette
13. Which of the following set of key will you use to type "475"?

(A) 3, 2, 1	(B) 9, 0, 6
(C) 4, 7, 5	(D) 8, 1, 9
14. Which device can you use to read books online?

(A) E-reader	(B) Pencil
(C) Remote	(D) Watch
15. Which of the following key is NOT part of the alphabet keys?

(A) A	(B) F
(C) G	(D) Delete
16. Which of the following are the main parts of a computer system.

(A) Keyboard, Monitor, Mouse, Joystick
(B) Speakers, Pen Drive, Monitor, Keyboard
(C) Keyboard, Monitor, Mouse, CPU
(D) Keyboard, Mouse, Printer, Laser Pen
17. What is the purpose of the Lines tool in Tux Paint?


(A) To draw straight lines	(B) To change colours
(C) To add text	(D) To erase drawings
18. What is the small wheel in the middle of the mouse used for?

(A) To click
(B) To move up and down the page
(C) To turn off the mouse
(D) To make the mouse bigger





19. Which of the following tasks can be done using a computer?
- (A) Perform calculations (B) Store and retrieve data
(C) Run software programs (D) All of these
20. Which finger you generally use to click the left button of the mouse?
- (A) Middle finger
(B) Index finger
(C) Ring finger
(D) Thumb
21. Which part of the computer is also known as Visual Display Unit?
- (A) Keyboard
(B) CPU
(C) Monitor
(D) Mouse
22. What do we need to do to move an object on the screen with the mouse?
- (A) Click the object quickly
(B) Drag the object by holding down the mouse button
(C) Type on the keyboard
(D) Close the window
23. Which of the following is the mascot of Tux Paint?





24. What is the purpose of the following device?



- (A) To type text
- (B) To listen music
- (C) To print
- (D) To move the cursor

25. The given group is used for:



- (A) Selecting the shapes
- (B) Selecting the color
- (C) Selecting the tools
- (D) Closing the paint program

Section C (Competency Enhancement)

26. Anirudh uses a smart machine to clean his house. Which machine helps him do that?

(A)



(B)



(C)



(D)





27. Kirti's teacher asks her to enter her age in a Note pad, which key should Kirti use to enter her age?
- (A) Alphabet key (B) Number key
(C) Function key (D) Special key
28. Hridya has drawn a hut in Paint and wants to fill it with colour. Which tool should she use to do that?
- (A) Pencil (B) Eraser
(C) Fill with color (D) Color Picker
29. Atul notices his father charging his phone by placing it on a stand without using a cable. What device is his father using to charge the phone?
- (A) Power Bank (B) Wireless Charger
(C) Car Charger (D) Solar Charger
30. Shivansh went on a jungle safari with his parents. While exploring, they saw trees, animals, and rivers. What do we call things that occur naturally in the world?
- (A) Human-made things (B) Artificial things
(C) Natural things (D) Mechanical things





web



click

